





1

2

3

4

5












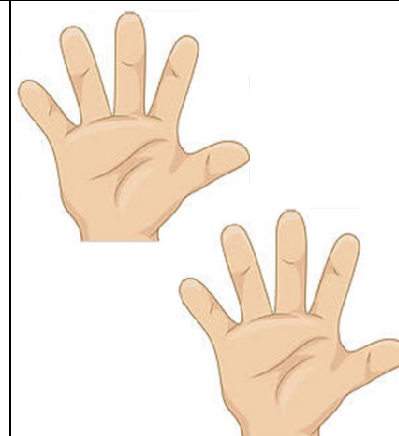
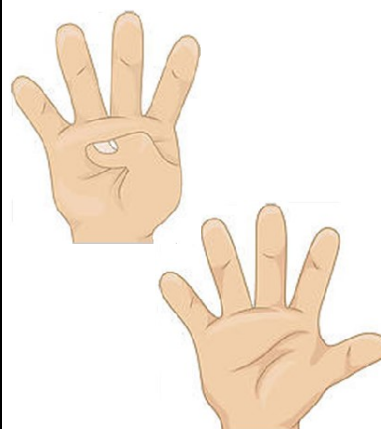
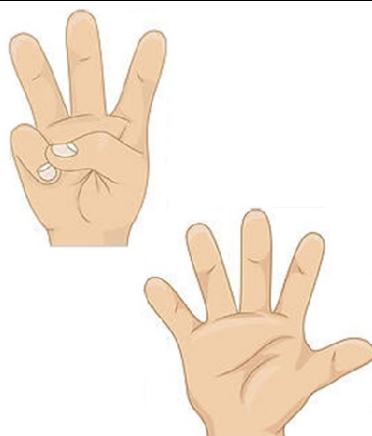


6

7

8

9

10



Prénom :

Date

Mathématiques

Les nombres de 0 à 5

Écrire les chiffres de 0 à 5.

0 0 0 0 0 0 0 0 0 0 0 0 0

1 1 1 1 1 1 1 1 1 1 1 1 1

2 2 2 2 2 2 2 2 2 2 2 2 2

3 3 3 3 3 3 3 3 3 3 3 3 3

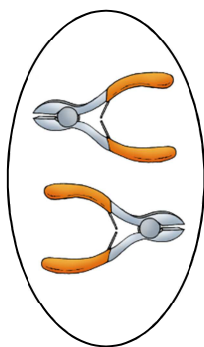
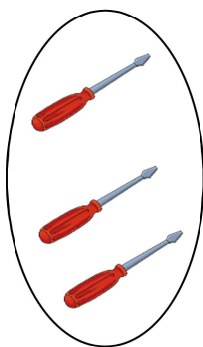


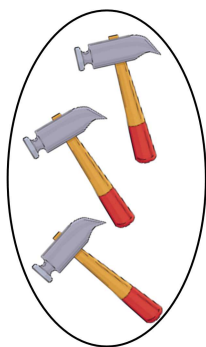

4 4 4 4 4 4 4 4 4 4 4 4 4

5 5 5 5 5 5 5 5 5 5 5 5 5

Mathématiques

Les nombres de 0 à 5

1. Relier chaque collection à son étiquette.



0

1

2

3

4

5

2. Dessiner les billes dans chaque sac.



5

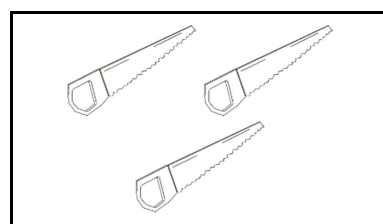
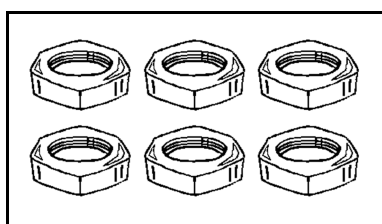
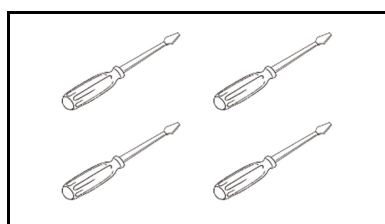
3

2

1

4

3. Barrer les objets qui sont en trop.



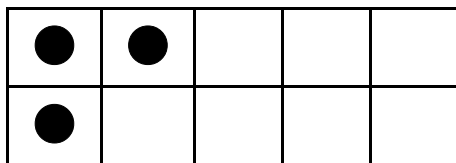
3

5

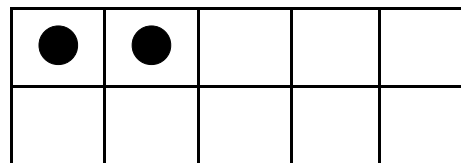
2

4. Compléter en dessinant les jetons manquants.

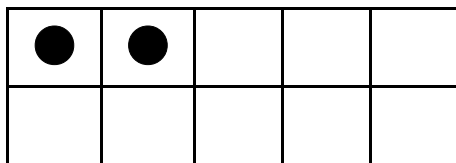
5



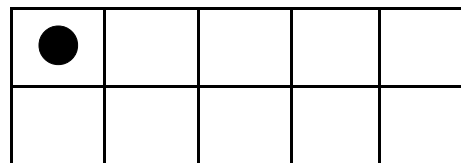
4



3



2







Calcul



Addition de deux nombres



0 1 2 3 4 5 6 7 8 9 10



Compléter et calculer



				
<input type="text"/>	<input type="text"/>			
<input type="text"/>	+	<input type="text"/>	=	<input type="text"/>



				
<input type="text"/>	<input type="text"/>			
<input type="text"/>	+	<input type="text"/>	=	<input type="text"/>



				
<input type="text"/>	<input type="text"/>			
<input type="text"/>	+	<input type="text"/>	=	<input type="text"/>



				
<input type="text"/>	<input type="text"/>			
<input type="text"/>	+	<input type="text"/>	=	<input type="text"/>



				
<input type="text"/>	<input type="text"/>			
<input type="text"/>	+	<input type="text"/>	=	<input type="text"/>



				
<input type="text"/>	<input type="text"/>			
<input type="text"/>	+	<input type="text"/>	=	<input type="text"/>



				
<input type="text"/>	<input type="text"/>			
<input type="text"/>	+	<input type="text"/>	=	<input type="text"/>

				
<input type="text"/>	<input type="text"/>			
<input type="text"/>	+	<input type="text"/>	=	<input type="text"/>

				
<input type="text"/>	<input type="text"/>			
<input type="text"/>	+	<input type="text"/>	=	<input type="text"/>

				
<input type="text"/>	<input type="text"/>			
<input type="text"/>	+	<input type="text"/>	=	<input type="text"/>

				
<input type="text"/>	<input type="text"/>			
<input type="text"/>	+	<input type="text"/>	=	<input type="text"/>

				
<input type="text"/>	<input type="text"/>			
<input type="text"/>	+	<input type="text"/>	=	<input type="text"/>