

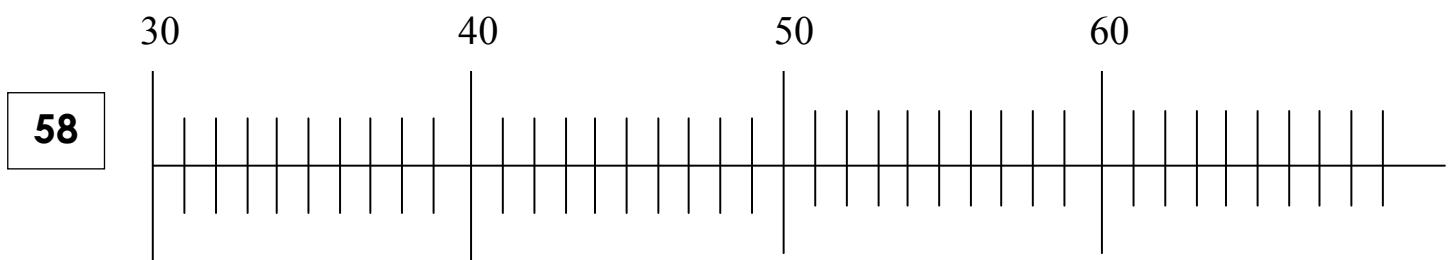
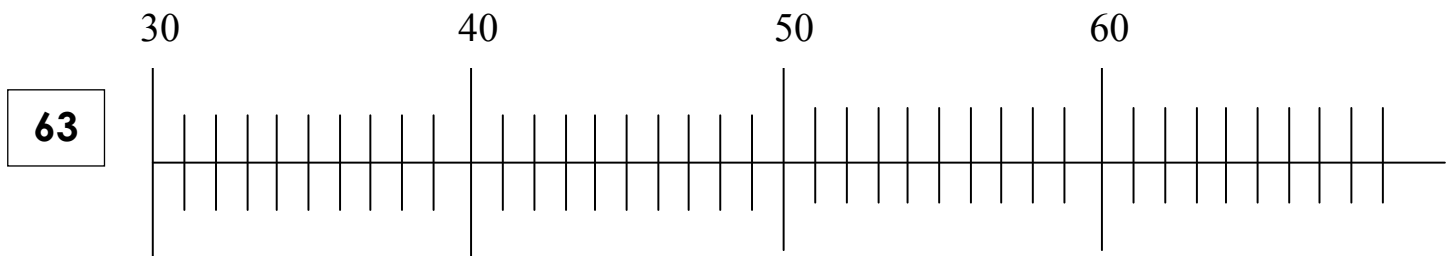
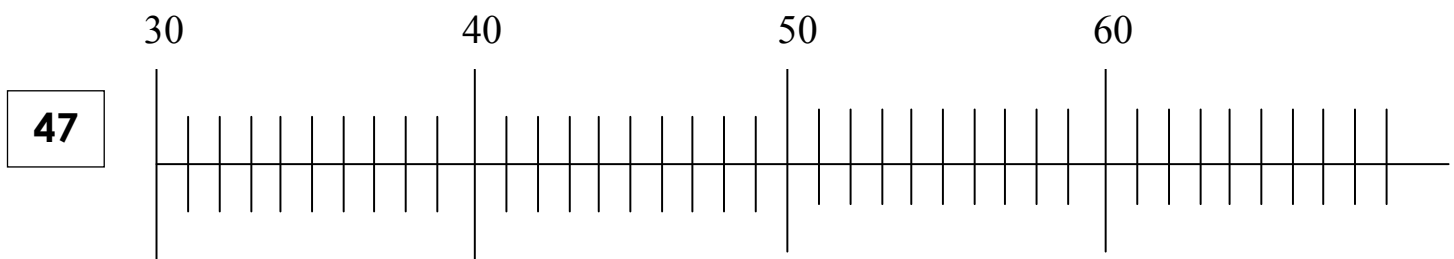
Les nombres de 0 à 69

- Ecris la suite des nombres.

48 – 49 – ___ – ___ – 52 – 53 – ___ – 55 – ___ – ___ – ___ – ___

58 – 59 – ___ – ___ – 62 – 63 – ___ – 65 – ___ – ___ – ___ – ___

- Place sur chaque règle graduée le nombre indiqué.



- Range les nombres du plus petit au plus grand.

67 – 26 – 65 – 37 – 62 – 56 – 64 – 46

___ – ___ – ___ – ___ – ___ – ___ – ___ – ___