



Calcul

Fiche 2

Les soustractions à retenues

1 Calcule ces soustractions en colonne:

$$\begin{array}{r} 356 \\ - 258 \\ \hline \end{array}$$


$$\begin{array}{r} 328 \\ - 87 \\ \hline \end{array}$$


$$\begin{array}{r} 515 \\ - 509 \\ \hline \end{array}$$


$$\begin{array}{r} 791 \\ - 752 \\ \hline \end{array}$$


$$\begin{array}{r} 993 \\ - 8 \\ \hline \end{array}$$

2 Calcule ces soustractions en colonne:


$$649 - 283$$



$$758 - 259$$



$$295 - 139$$


$$894 - 189$$


3 Calcule ces différences en colonne: (attention à l'ordre des nombres)

$$58 - 140$$


$$387 - 119$$


$$547 - 858$$


$$542 - 297$$
