

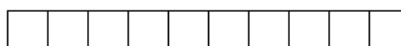



Vous devez dessiner, en utilisant des cubes,
une plaque c'est 100 cubes,



une barre c'est dix cubes



, un cube est une unité

