



Réunion de quantité

Écrire l'opération.
(3 termes).

Calcul

Fiche n°8A


lundi mardi mercredi jeudi vendredi samedi dimanche




/ /

1 Écris les opérations et calcule :

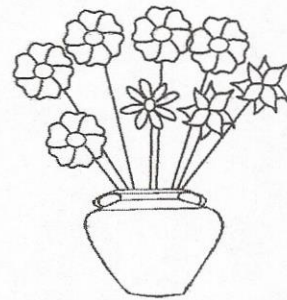
3+2=5



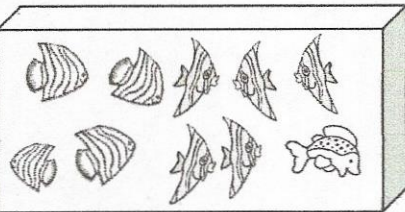
$3 + 1 + 2 = 6$



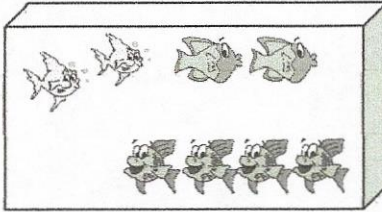
$___ + ___ + ___ = ___$




$___ + ___ + ___ = ___$



$___ + ___ + ___ = ___$



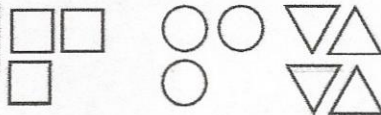
$___ + ___ + ___ = ___$



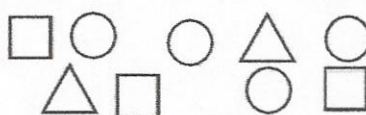
$___ + ___ + ___ = ___$

2 Écris les opérations et calcule :


3+2=5



$___ + ___ + ___ = ___$



$___ + ___ + ___ = ___$

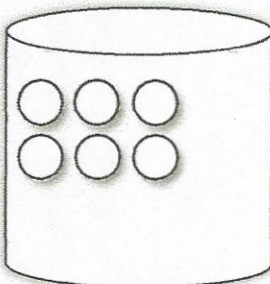


$___ + ___ + ___ = ___$

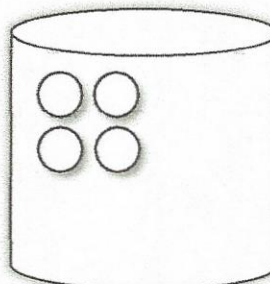
3 Complète avec des gommettes pour avoir 10 dans chaque panier :

3+2=5

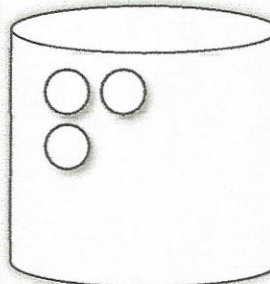
$6 + ___ = 10$



$___ + ___ = 10$



$___ + ___ = 10$



$___ + ___ = 10$

