



lundi mardi mercredi jeudi vendredi samedi dimanche




/ /

A réunir des quantités. Écrire l'addition.

1 Écris l'opération et indique combien de fleurs il y aura dans le vase :




2 3




2 + 3 = 5


1 2



1 + 2 =




+ =



+ =



+ =




+ =


2 Écris l'opération et calcule :



+ =



+ =



+ =