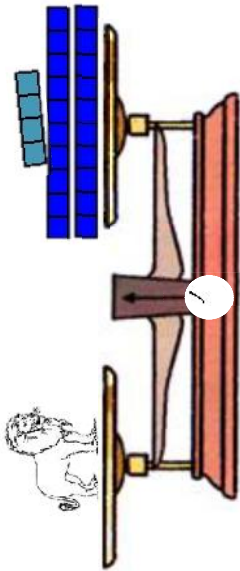
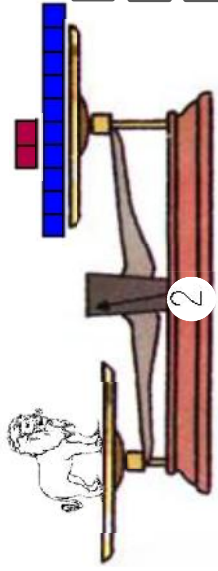


Donner la mesure des masses

1 Coche la bonne réponse. Le lion pèse :



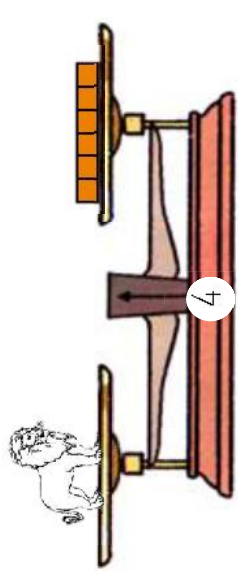
- 24 cubes  
 + de 24 cubes  
 - de 24 cubes



- 12 cubes  
 + de 12 cubes  
 - de 12 cubes



- 40 cubes  
 + de 40 cubes  
 - de 40 cubes

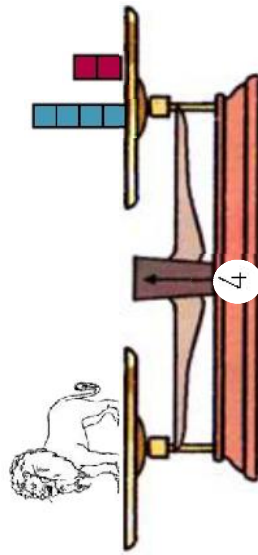
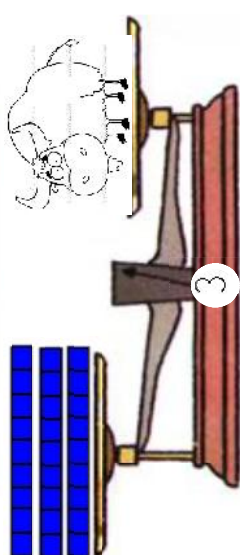
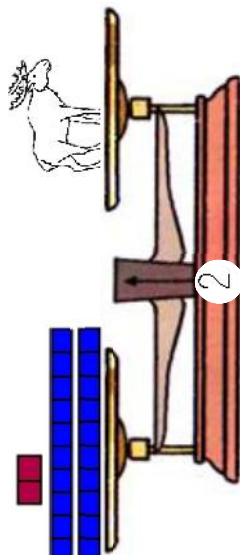

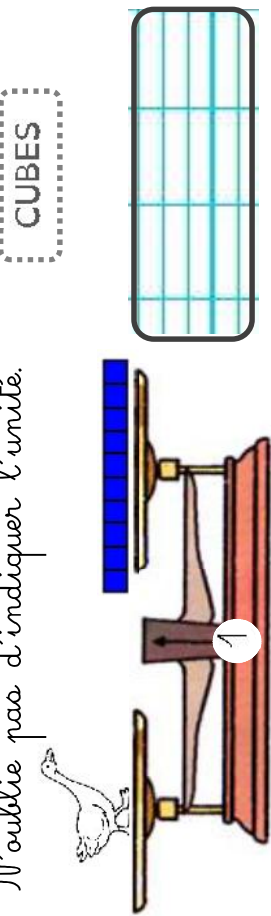


- 6 cubes  
 + de 6 cubes  
 - de 6 cubes

Donner la mesure des masses

2 Indique la masse des animaux quand c'est possible.

N'oublie pas d'indiquer l'unité.



CUBES