


Prénom : _____

Date: _____

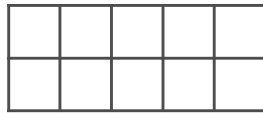
CALCULS : soustractions de petits nombres



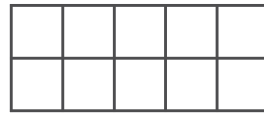
1 Aide-toi des boites pour calculer :



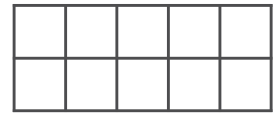
$5 - 2 =$



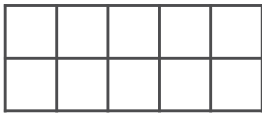
$6 - 3 =$



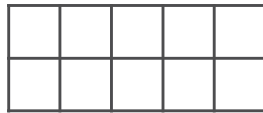
$8 - 4 =$



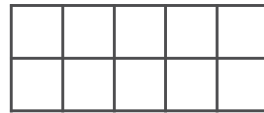
$9 - 5 =$



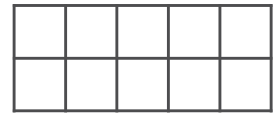
$6 - 2 =$



$6 - 1 =$



$7 - 1 =$



$5 - 3 =$

2 Colorie les égalités justes et barre celles qui sont fausses :

$8 - 2 = 6$

$7 - 3 = 5$

$7 - 1 = 5$

$5 - 3 = 4$

$10 - 3 = 7$

$6 - 2 = 8$

$5 - 3 = 2$

$10 - 5 = 6$

$5 - 2 = 3$

$8 - 3 = 5$

$5 - 3 = 3$

$9 - 3 = 6$

Problème :

Ce matin, Hugo avait 9 billes. Pendant la récréation, il en a perdu 3.
Combien reste-t-il de billes à Hugo maintenant?

dessin ou calcul :



phrase réponse :
