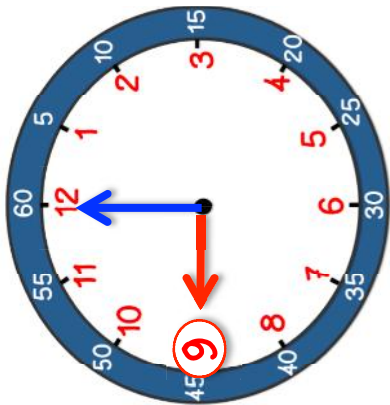




# L'heure

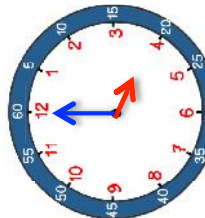
Pour lire l'heure, on regarde les aiguilles d'une horloge.



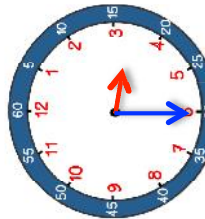
La petite aiguille indique l'heure.

La grande aiguille indique les minutes

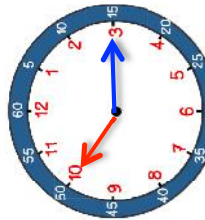
Il est 9 h 00



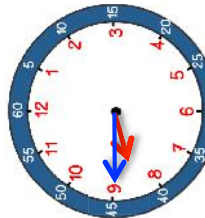
4 h 00



3 h 30

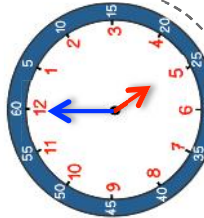
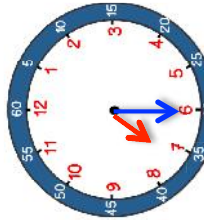
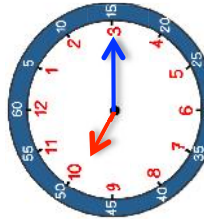
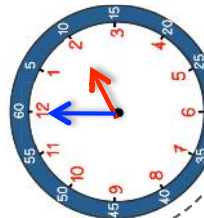


10 h 15



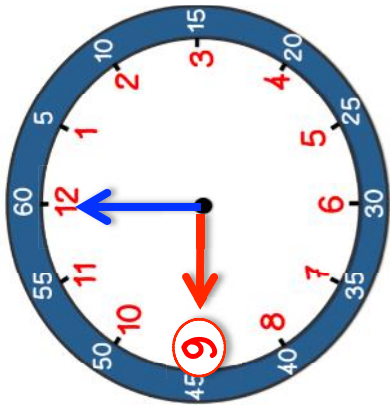
8 h 45

Trouve l'heure de chaque horloge.



# L'heure

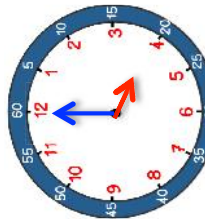
Pour lire l'heure, on regarde les aiguilles d'une horloge.



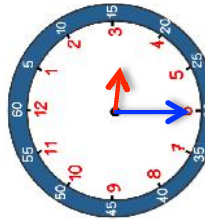
La petite aiguille indique l'heure.

La grande aiguille indique les minutes

Il est 9 h 00



4 h 00



3 h 30



10 h 15



8 h 45

Trouve l'heure de chaque horloge.

