



1 Calcule.

Exemple




$3 - 1 = 2$

$4 - 1 = \underline{\quad}$



$5 - 1 = \underline{\quad}$



$2 - 1 = \underline{\quad}$



$3 - 2 = \underline{\quad}$



2 Calcule.

$5 - 2 = \underline{\quad}$


$3 - 2 = \underline{\quad}$

$5 - 3 = \underline{\quad}$

$4 - 3 = \underline{\quad}$

$6 - 2 = \underline{\quad}$

$8 - 1 = \underline{\quad}$



3 Colorie ce qui fait 2.

$4 - 2$

$6 - 1$

$8 - 5$

$6 - 4$

$5 - 3$

$5 - 2$

$7 - 5$

$3 - 1$

$8 - 6$

$6 - 2$