



# La monnaie



La Doudou Classe CP

Combien y-a-t-il d' € dans chaque porte-monnaie ?




# Les euros



La Domrod Classe CP

Voici la vitrine d'un magasin de jouets.




8€

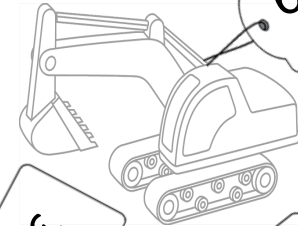


4€


20€




13€



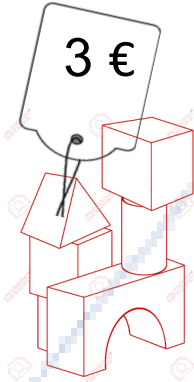
6€




2€




11€




3€



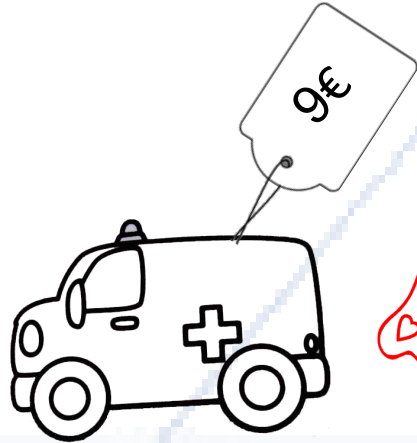
15€



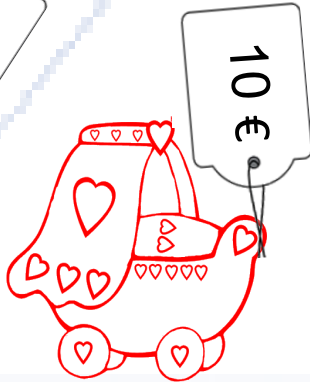
5€



14€



9€



10€



12€



18€



7€


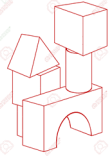


# Les euros



La Dorned Classe CP


Trouve le prix de chaque chariot.



.... + ..... + ..... = .....



.... + ..... = .....



.... + ..... + ..... = .....




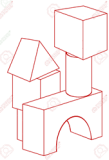
.... + ..... + ..... = .....



# Les euros



La Douce Classe CP



22



23



$$4... + 3... + 15... = 22...$$

$$13... + 10... = 23...$$



23



25



$$11... + 7... + 5... = 23...$$

$$14... + 9... + 2... = 25...$$