


# DIRE ET ÉCRIRE DES NOMBRES

DE 20 À 69


▶ Élève : .....

Date : .....


1.16




24




Fais des paquets de dix, puis calcule le nombre de jetons.




A




B




C



D



E



F



# DIRE ET ÉCRIRE DES NOMBRES


DE 20 À 69

▶ Élève : .....

Date : .....

1.17

25 ▶



Dessine le nombre de jetons correspondant aux nombres écrits dans les étiquettes (tu peux faire des paquets de 10 pour t'aider).

15 ▶

20 ▶

12 ▶

27 ▶

10 ▶

21 ▶