
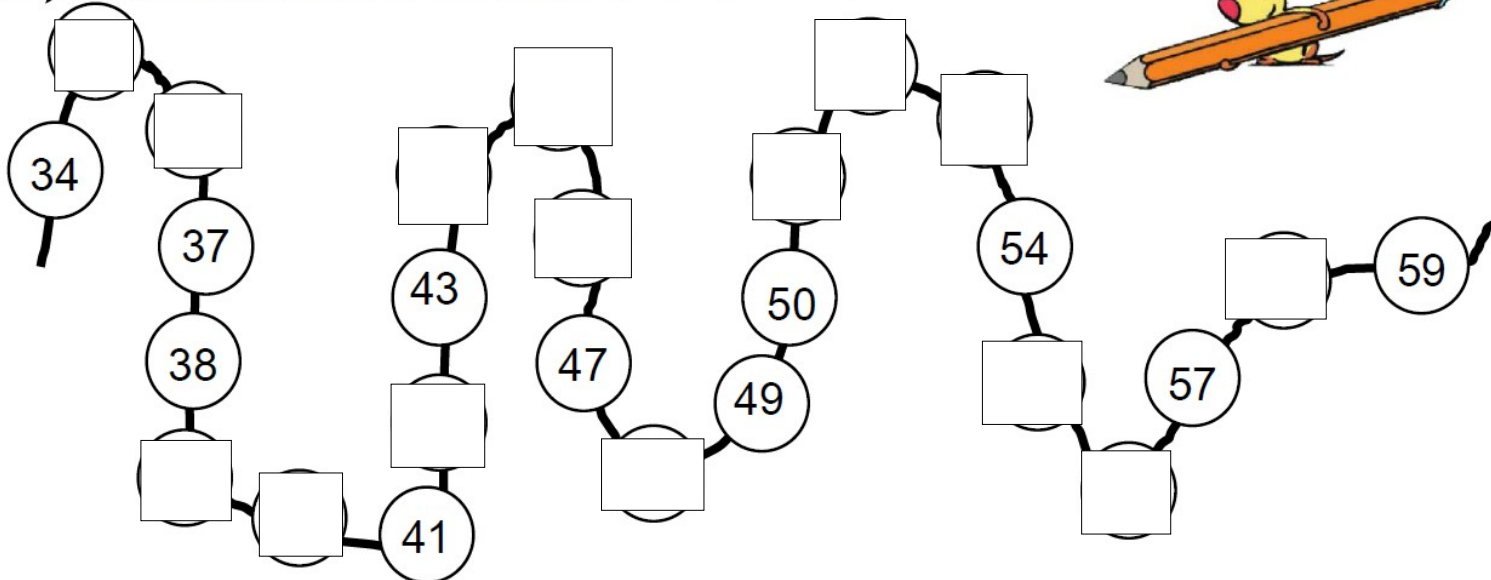
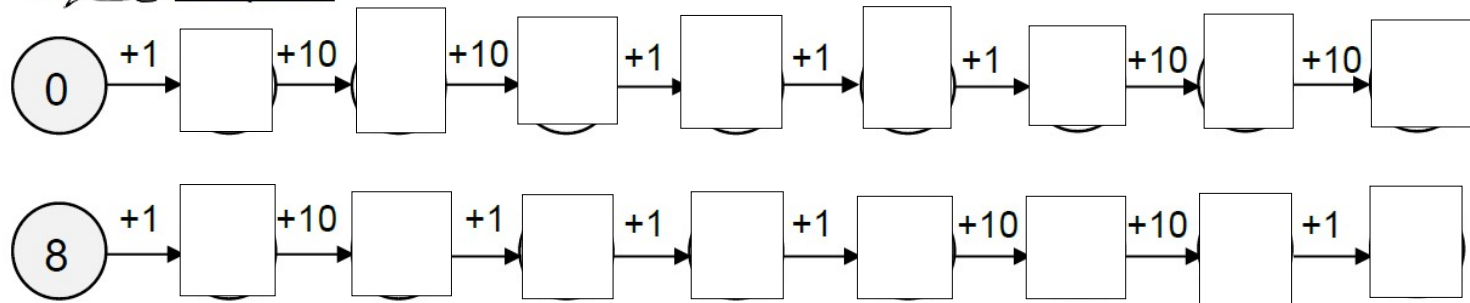


2.  **Complète** la file numérique. 😊 😐 😞 😡




3.  **Complète** 😊 😐 😞 😡



5.  **Complète.** 😊 😐 😞 😡

$6 + 5 = \square$	$5 - 2 = \square$	$10 - \square = 8$	$10 - 2 = \square$
$7 - 4 = \square$	$8 - 3 = \square$	$3 + \square = 10$	$5 + \square = 10$

6.  **Ecris** le nombre de timbres d'Arthur. 😊 😐 😞 😡



Arthur a  timbres.