
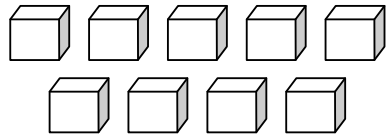


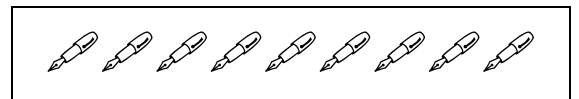
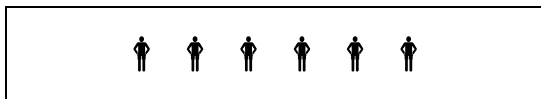

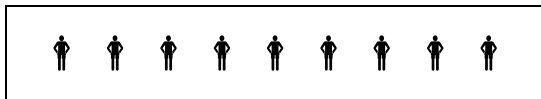

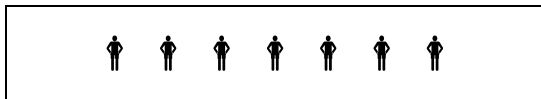

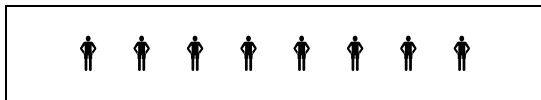
	Les nombres de 0 à 19	
-----------------------------------------------------------------------------------	-----------------------	--

19	dix-neuf		
----	----------	------------------------------------------------------------------------------------	-------------------------------------------------------------------------------------

1. Ecris le nombre suivant.


11 ⇒ _____	18 ⇒ _____	16 ⇒ _____	15 ⇒ _____
9 ⇒ _____	12 ⇒ _____	17 ⇒ _____	14 ⇒ _____


2. Relie les collections qui ont le même nombre d'objets.





3. Indique le nombre de cases colorées.

	⇒	<input style="width: 100%; height: 100%;" type="text"/>
------------------------------------------------------------------------------------	---	---------------------------------------------------------

	⇒	<input style="width: 100%; height: 100%;" type="text"/>
-------------------------------------------------------------------------------------	---	---------------------------------------------------------

	⇒	<input style="width: 100%; height: 100%;" type="text"/>
-------------------------------------------------------------------------------------	---	---------------------------------------------------------

	⇒	<input style="width: 100%; height: 100%;" type="text"/>
-------------------------------------------------------------------------------------	---	---------------------------------------------------------

	⇒	<input style="width: 100%; height: 100%;" type="text"/>
------------------------------------------------------------------------------------	---	---------------------------------------------------------

4. Complète le tableau.

avant	le nombre	après
	11	
	14	
	18	
	15	

5. Place les signes > ou <.

$10 _ 19$

$19 _ 15$

$17 _ 12$

$18 _ 17$

$19 _ 15$

$19 _ 9$

$13 _ 8$

$12 _ 19$

$17 _ 19$

6. Calcule.

$10 + 8 = _$

$10 + 5 = _$

$10 + 0 = _$

$10 + 6 = _$

$10 + 7 = _$


$10 + 2 = _$

$10 + 3 = _$

$10 + 1 = _$

$10 + 9 = _$

7. Ecris le nombre en lettres.



dix-neuf,