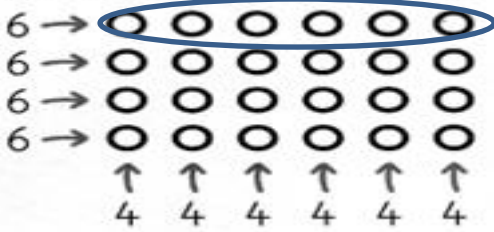
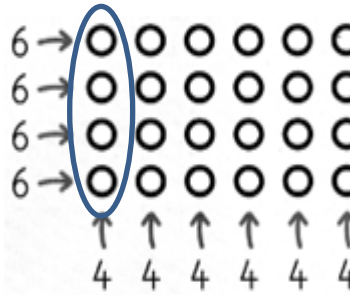


✓ Si je connais 4 x 6, alors je connais aussi 6 x 4.




$$6 + 6 + 6 + 6 = 24$$

$$4 \times 6 = 24$$



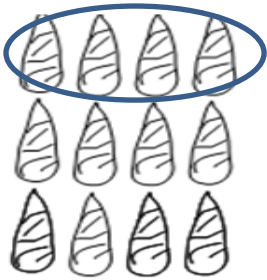
$$4 + 4 + 4 + 4 + 4 = 24$$

$$6 \times 4 = 24$$



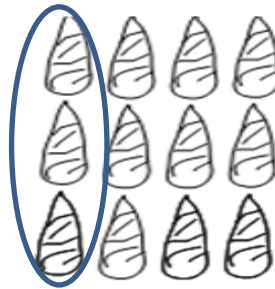
Obélix a taillé des menhirs ; il les range de différentes manières.

Aide-le à les compter :



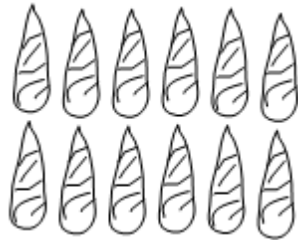
$$\dots + \dots + \dots = \dots$$

$$\dots \times \dots = \dots$$



$$\dots + \dots + \dots + \dots = \dots$$

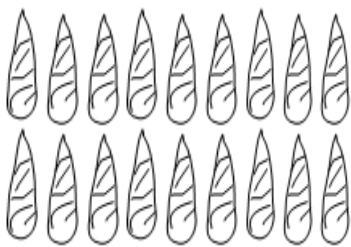
$$\dots \times \dots = \dots$$



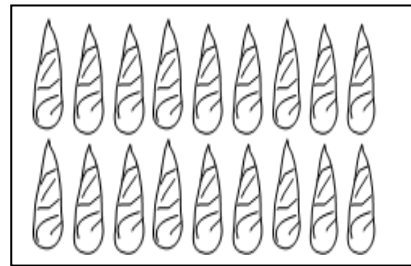
$$\dots \times \dots = \dots$$



$$\dots \times \dots = \dots$$



$$\dots \times \dots = \dots$$



$$\dots \times \dots = \dots$$



$$\dots \times \dots = \dots$$



$$\dots \times \dots = \dots$$