



4 pingouins

Combien en manque-t-il ?



4 pingouins

Combien en manque-t-il ?







4 pingouins

Combien en manque-t-il ?



4 pingouins

Combien en manque-t-il ?






4 pingouins

Combien en manque-t-il ?



4 pingouins

Combien en manque-t-il ?




4 pingouins

Combien en manque-t-il ?



4 pingouins

Combien en manque-t-il ?



4 pingouins

Combien en manque-t-il ?



4 pingouins

Combien en manque-t-il ?

