


# Le passage de la dizaine

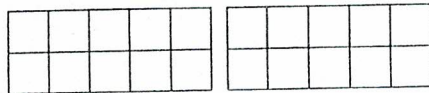
Dessine les bouchons et fais les calculs.

$8 + 5$




$$8 + 5 = 8 + 2 + 3 = 13$$

$9 + 4$



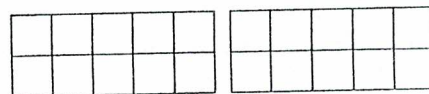
$9 + 4 = 9 + \square + \square = \square$

$8 + 6$



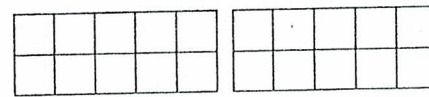
$$8 + 6 = 8 + 2 + 4 = 14$$

$9 + 3$




$9 + 3 = 9 + \square + \square = \square$

$7 + 5$



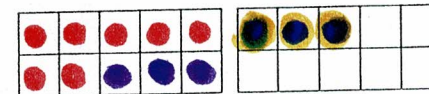
$7 + 5 = 7 + \square + \square = \square$

$6 + 6$



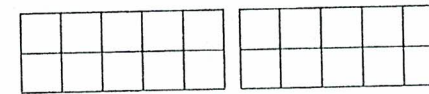
$6 + 6 = 6 + 4 + 2 = \square$

$7 + 6$



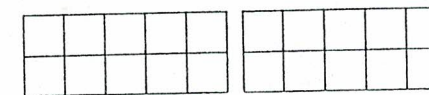
$7 + 6 = 7 + 3 + 3 = 13$

$8 + 8$



$8 + 8 = 8 + \square + \square = \square$

$8 + 4$



$8 + 4 = 8 + \square + \square = \square$

$9 + 8$



$9 + 8 = 9 + \square + \square = \square$