




lundi mardi mercredi jeudi vendredi samedi dimanche




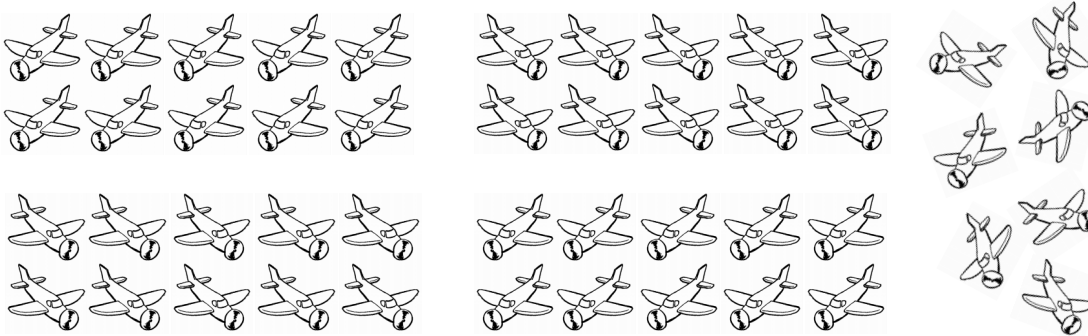
/ /


1 Entoure des paquets de 10 et écris le nombre d'objets


netit







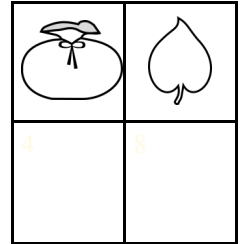




lundi mardi mercredi jeudi vendredi samedi dimanche



/ /

1 Entoure des paquets de 10 et écris le nombre de feuilles.





1

Entoure des paquets de 10 et écris le nombre de feuilles.










lundi mardi mercredi jeudi vendredi samedi dimanche




/ /

1 Entoure des paquets de 10 et écris le nombre d'objets








6	3




4	8





5	9




8	4



8	7




2	1





6	9





1 Entoure des paquets de 10 et écris le nombre d'objets
















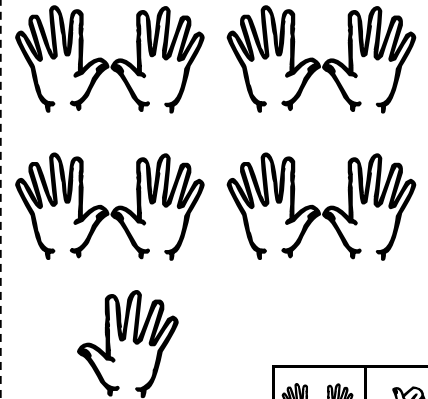
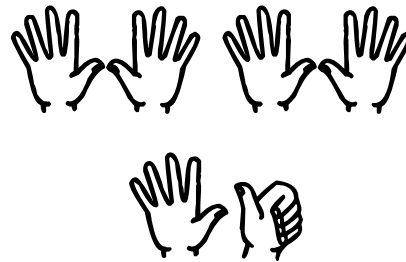







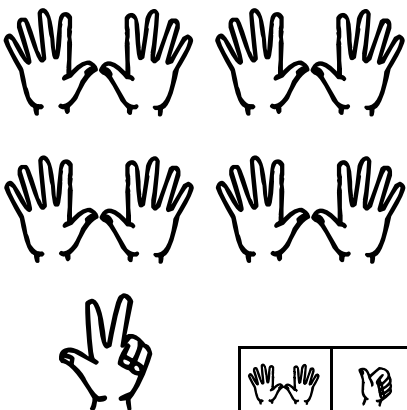

1 Entoure des paquets de 10 et écris le nombre de doigts.












lundi mardi mercredi jeudi vendredi samedi dimanche



/ /

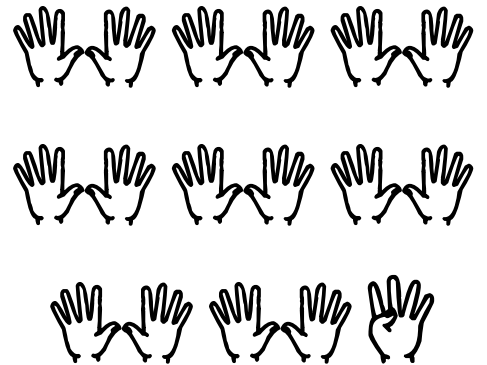
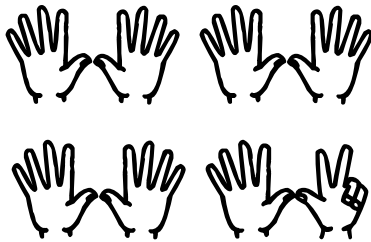
1 Entoure des paquets de 10 et écris le nombre de doigts.

netit


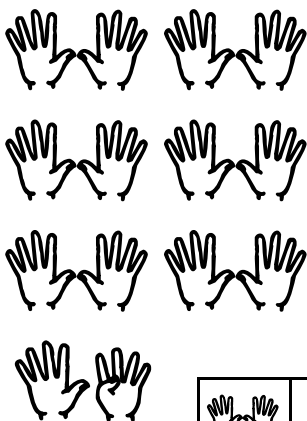














lundi mardi mercredi jeudi vendredi samedi dimanche



/ /

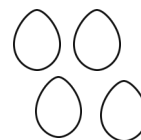


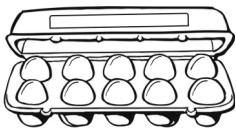
1 Ecris le nombre d'objets






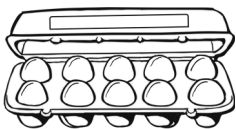
netit





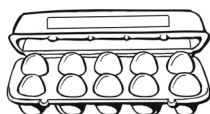













1 Complète comme l'exemple



d	u
3	5

Il y a **35** cubes

d	u

Il y a  cubes

d	u

Il y a  cubes

d	u

Il y a  cubes

d	u

Il y a  cubes

d	u

Il y a  cubes

d	u

Il y a  cubes

d	u

Il y a  cubes

d	u

Il y a  cubes

d	u

Il y a  cubes

d	u

Il y a  cubes

d	u

Il y a  cubes

d	u

Il y a  cubes

d	u

Il y a  cubes

d	u

Il y a  cubes




lundi mardi mercredi jeudi vendredi samedi dimanche




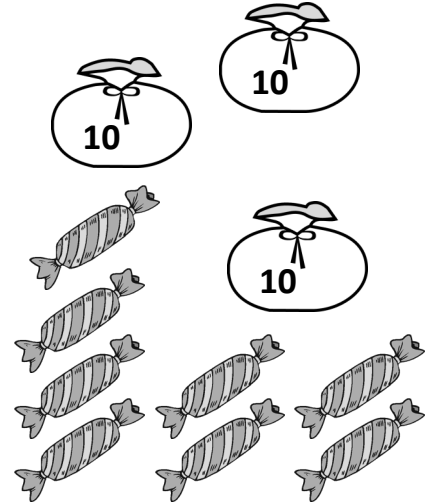
/ /


1 Indique le nombre de bonbons.


petit

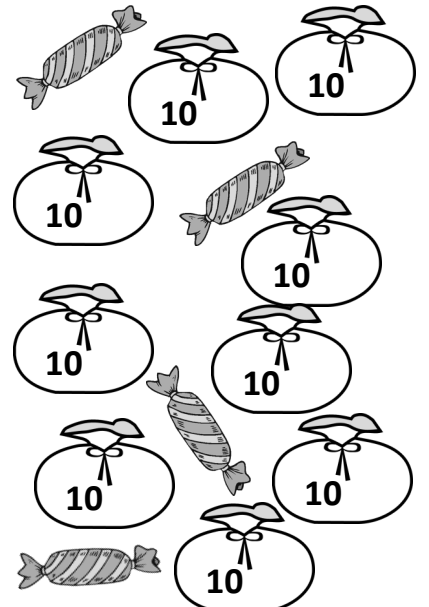






lundi mardi mercredi jeudi vendredi samedi dimanche




/ /


1 Complète comme l'exemple.




Il y a **25** perles




Il y a  perles




Il y a  perles




Il y a  perles




Il y a  perles




Il y a  perles




Il y a  perles




Il y a  perles




Il y a  perles




Il y a  perles




Il y a  perles




Il y a  perles



Il y a  perles



Il y a  perles



Il y a  perles

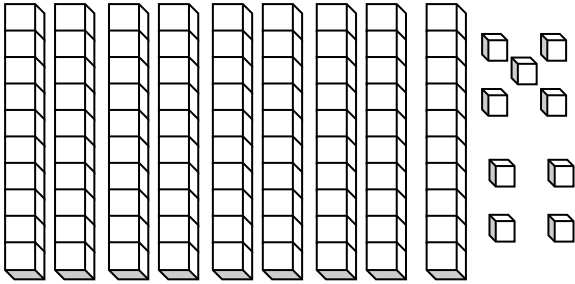


lundi mardi mercredi jeudi vendredi samedi dimanche

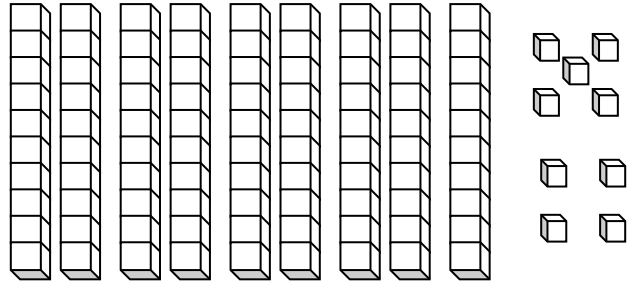


/ /

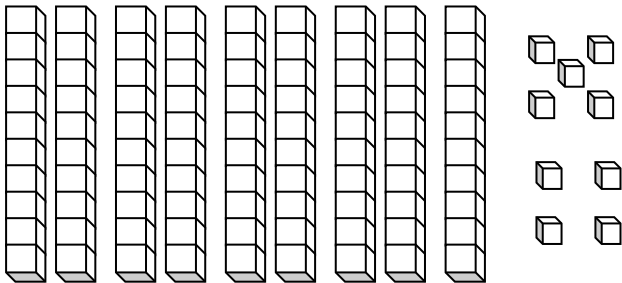
1 Colorie ce dont tu as besoin.



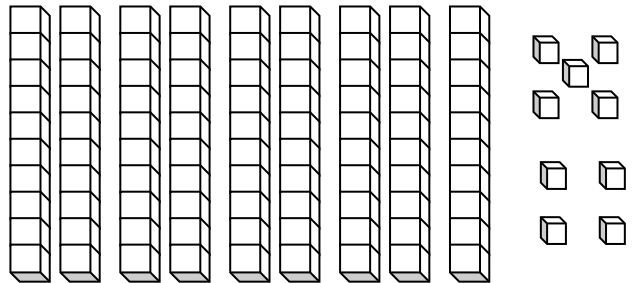
14



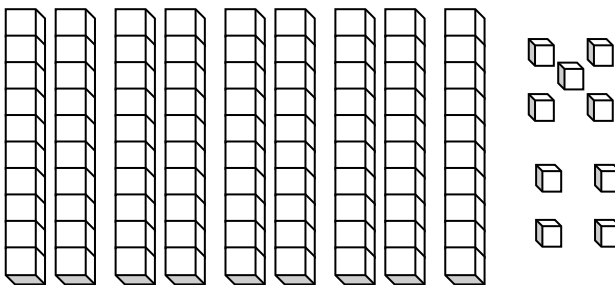
53



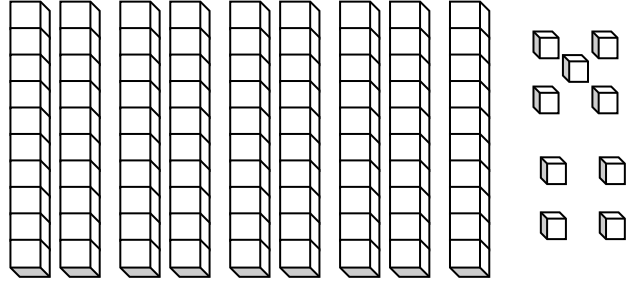
37



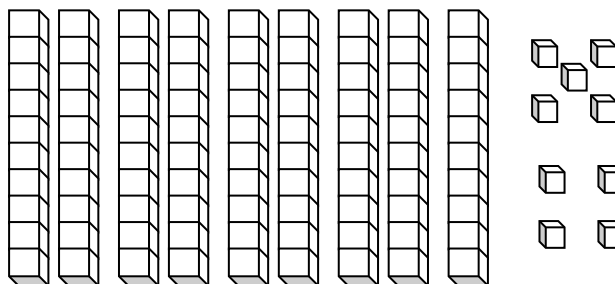
82



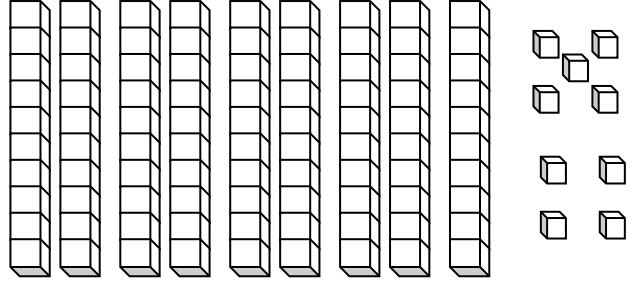
96



25



48



71

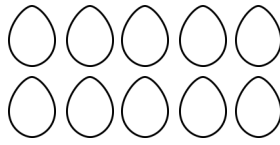
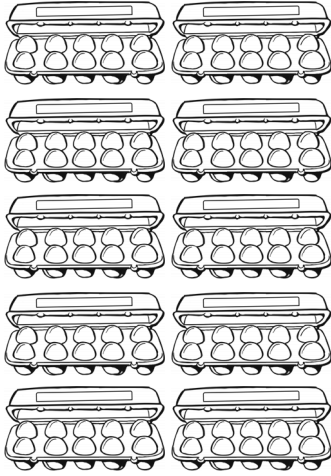


lundi mardi mercredi jeudi vendredi samedi dimanche


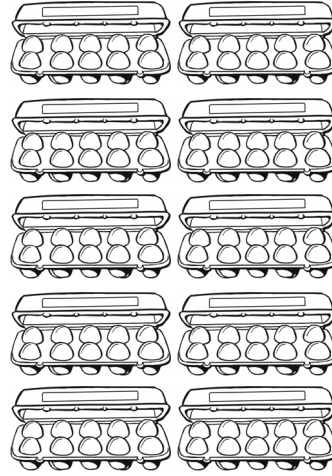


/ /

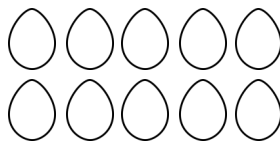
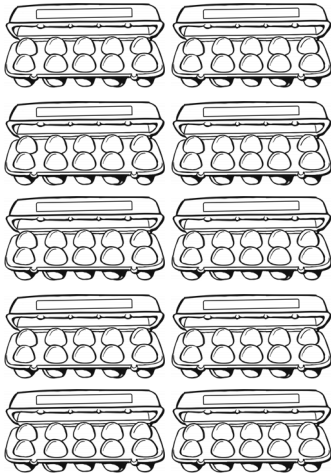
1 Colorie ce dont tu as besoin.




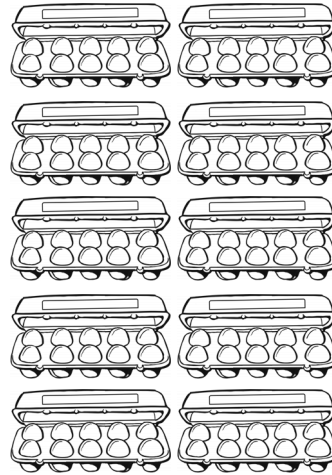
64



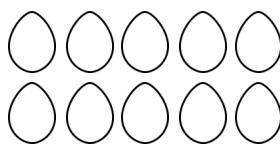
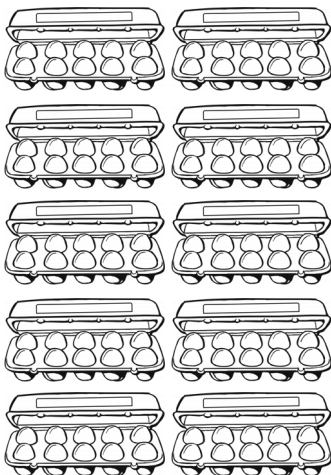
32




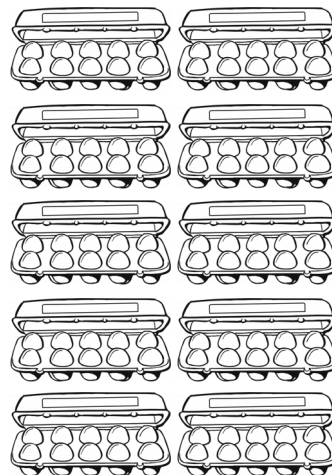
92



18



51



75

















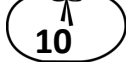
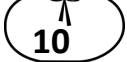
lundi mardi mercredi jeudi vendredi samedi dimanche



















/ /

1 Colorie ce dont tu as besoin.



































13















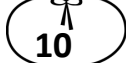

37

















29

45

99

86



lundi mardi mercredi jeudi vendredi samedi dimanche



/ /

1 Complète.

3+2=5



10 + 10 = 20

d	u
2	0



10 + \_\_\_ + \_\_\_ + \_\_\_ = \_\_\_

d	u



10 + \_\_\_ + \_\_\_ + \_\_\_ + \_\_\_ = \_\_\_

d	u



10 + \_\_\_ + \_\_\_ = \_\_\_

d	u



\_\_\_ + \_\_\_ + \_\_\_ + \_\_\_ + \_\_\_ + \_\_\_ = \_\_\_

d	u



\_\_\_ + \_\_\_ + \_\_\_ = \_\_\_

d	u



\_\_\_ = \_\_\_

d	u



lundi mardi mercredi jeudi vendredi samedi dimanche



/ /

1 Complète comme l'exemple.

3+2=5

10 CRAYONS 10 CRAYONS

10 + 10 + 4

20 + 4 = 24

d	u
2	4

10 CRAYONS 10 CRAYONS 10 CRAYONS 10 CRAYONS

10 + 10 + 10 + 10 + 8

\_\_\_\_\_ + \_\_\_\_\_ = \_\_\_\_\_

d	u

10 CRAYONS 10 CRAYONS 10 CRAYONS 10 CRAYONS 10 CRAYONS

\_\_\_\_\_ + \_\_\_\_\_ + \_\_\_\_\_ + \_\_\_\_\_ + \_\_\_\_\_ + \_\_\_\_\_

\_\_\_\_\_ + \_\_\_\_\_ = \_\_\_\_\_

d	u

10 CRAYONS 10 CRAYONS 10 CRAYONS

\_\_\_\_\_ + \_\_\_\_\_ + \_\_\_\_\_

\_\_\_\_\_ + \_\_\_\_\_ = \_\_\_\_\_

d	u





lundi mardi mercredi jeudi vendredi samedi dimanche




/ /


1 Entoure des paquets de 10 et écris l'opération.

petit

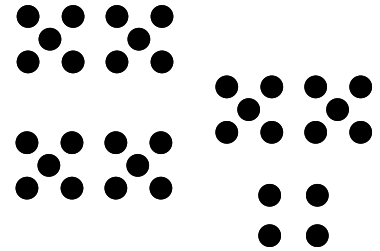
3 + 2 = 5




$$\underline{\quad} + \underline{\quad} = \underline{\quad}$$




$$\underline{\quad} + \underline{\quad} = \underline{\quad}$$




$$\underline{\quad} + \underline{\quad} = \underline{\quad}$$




$$\underline{\quad} + \underline{\quad} = \underline{\quad}$$




$$\underline{\quad} + \underline{\quad} = \underline{\quad}$$




$$\underline{\quad} + \underline{\quad} = \underline{\quad}$$



$$\underline{\quad} + \underline{\quad} = \underline{\quad}$$



$$\underline{\quad} + \underline{\quad} = \underline{\quad}$$



$$\underline{\quad} + \underline{\quad} = \underline{\quad}$$



lundi mardi mercredi jeudi vendredi samedi dimanche



/ /

**1** Complète comme l'exemple.

$3+2=5$

35

$30 + 5 = 35$

24

\_\_\_ + \_\_\_ = \_\_\_

46

\_\_\_ + \_\_\_ = \_\_\_

14

\_\_\_ + \_\_\_ = \_\_\_

28

\_\_\_ + \_\_\_ = \_\_\_

52

\_\_\_ + \_\_\_ = \_\_\_

15

\_\_\_ + \_\_\_ = \_\_\_

31

\_\_\_ + \_\_\_ = \_\_\_

**2** Complète comme l'exemple.

$3+2=5$

$30 + 5 = 35$

$60 + 4 = \underline{\quad}$

$20 + 3 = \underline{\quad}$

$20 + 1 = \underline{\quad}$

$50 + 6 = \underline{\quad}$

$30 + 7 = \underline{\quad}$

$10 + 8 = \underline{\quad}$

$40 + 0 = \underline{\quad}$

$50 + 2 = \underline{\quad}$

**3** Complète comme l'exemple.

$3+2=5$

$20 + \underline{\quad} = 24$

$10 + \underline{\quad} = 14$

$30 + \underline{\quad} = 39$

$\underline{\quad} + 9 = 29$

$\underline{\quad} + 3 = 53$

$\underline{\quad} + 3 = 43$

$50 + \underline{\quad} = 59$

$\underline{\quad} + 5 = 15$

$10 + \underline{\quad} = 19$

**4** Complète comme l'exemple.

$3+2=5$

$\underline{\quad} + \underline{\quad} = 37$

$\underline{\quad} + \underline{\quad} = 18$

$\underline{\quad} + \underline{\quad} = 57$

$\underline{\quad} + \underline{\quad} = 29$

$\underline{\quad} + \underline{\quad} = 72$

$\underline{\quad} + \underline{\quad} = 63$



lundi mardi mercredi jeudi vendredi samedi dimanche




/ /


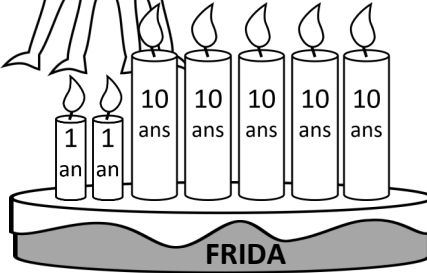
**1** Indique l'âge de chaque monstre.



J'ai \_\_\_\_\_  
ans.



J'ai \_\_\_\_\_  
ans.




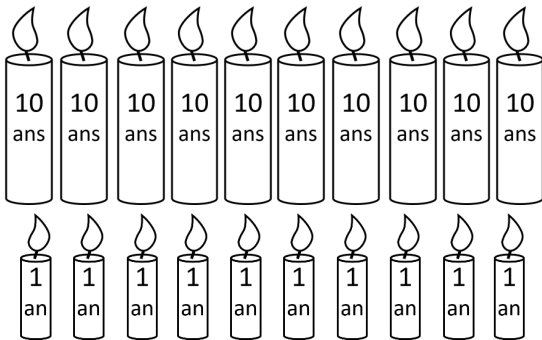
J'ai \_\_\_\_\_  
ans.



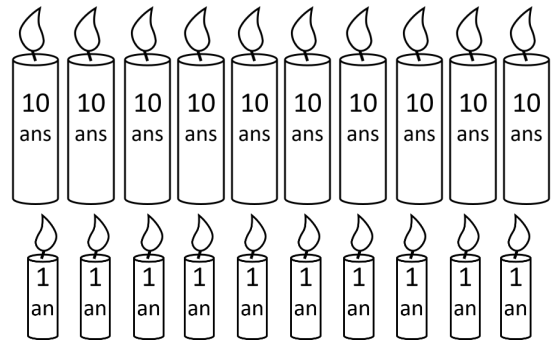
**2** Colorie le nombre minimum de bougies pour chaque anniversaire.



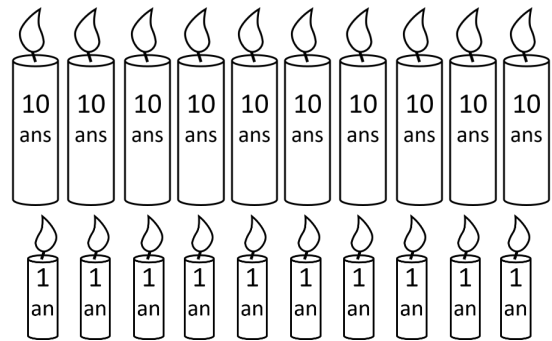
J'ai **38** ans.



J'ai **67** ans.



J'ai **12** ans.





lundi mardi mercredi jeudi vendredi samedi dimanche

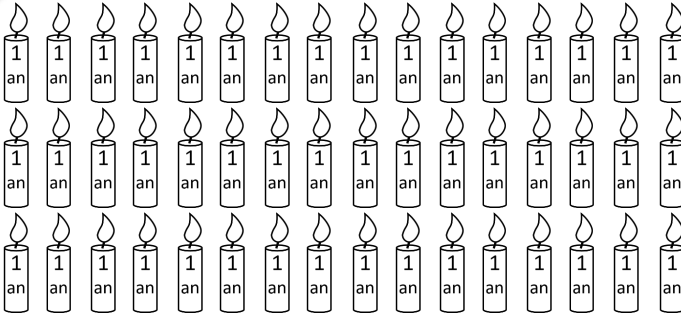


/ /

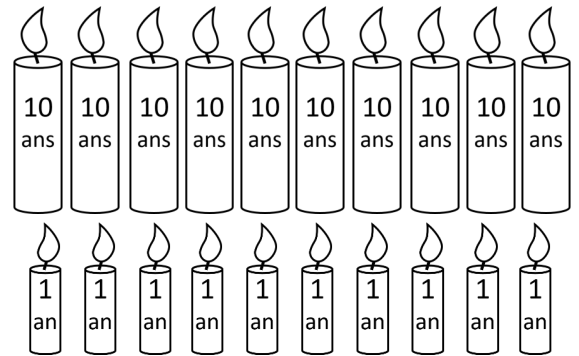
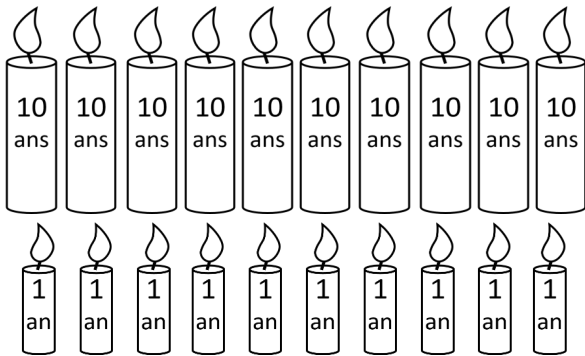
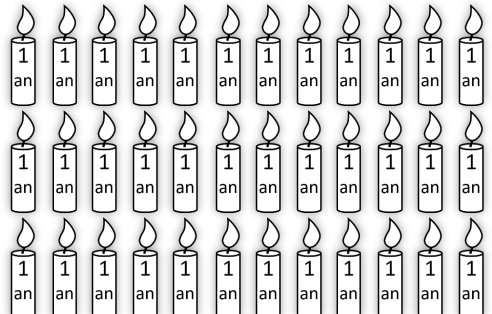
1 Aide les monstres à réduire le plus possible le nombre de bougies .



J'ai



J'ai



J'ai

