



Numeration

Compétence : Connaît les doubles des nombres inférieurs à 10.


① Observe les dominos et complète :




$$4 + 4 = 8$$



$$3 + 3 = 6$$

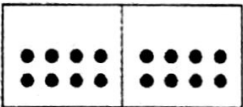


$$6 + 6 = 12$$

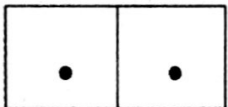


$$2 + 2 = 4$$


② Complète pour obtenir un double.




$$8 + 8 = 16$$



$$1 + 1 = 2$$

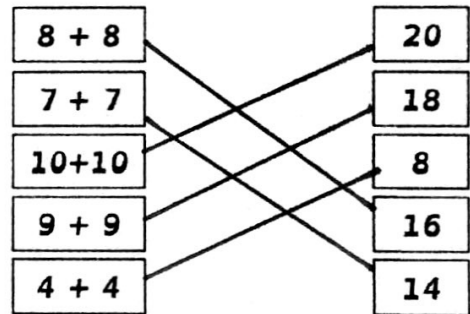
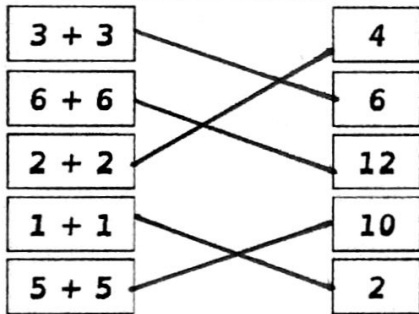


$$5 + 5 = 10$$

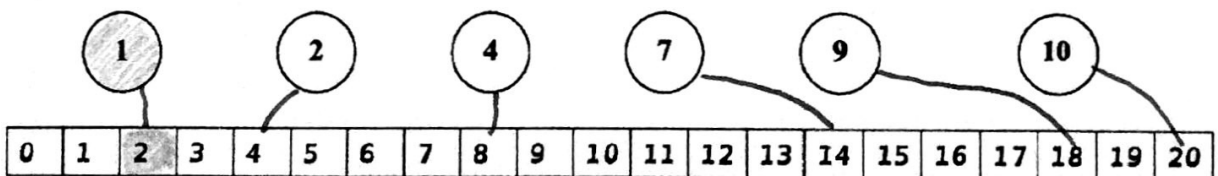


$$9 + 9 = 18$$

③ Relie les étiquettes.



④ Colorie les bulles et leur double de la même couleur.



⑤ Complète.

$$5 + 5 = 10$$

$$2 + 2 = 4$$

$$10 + 10 = 20$$

$$3 + 3 = 6$$

$$8 + 8 = 16$$

$$1 + 1 = 2$$

$$6 + 6 = 12$$

$$9 + 9 = 18$$

24