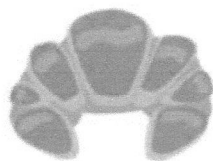



Estime le poids de chaque objet et colorie la bonne case.



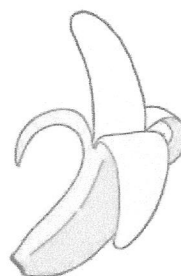
30 kg	50 g	20 mg
-------	------	-------



3 mg	100 g	2 kg
------	-------	------




4 kg	1 g	2 t
------	-----	-----



40 kg	10 g	200 g
-------	------	-------



10 g	10 kg	900 kg
------	-------	--------



10 kg	1 t	20 kg
-------	-----	-------