






# Numération

1 Colorie ce qui fait 457.



2 Ecris ces nombres en chiffres.




deux-cent-quatze

quatze-cent-trente-sept

trois-cent-douze


huit-cent-quarante-neuf

3 Ecris ces nombres en lettres.



4 Range ces nombres dans l'ordre croissant :

217 ; 604 ; 471 ; 925 ; 833 ; 128






# Numération

Fiche 12



1 Ecris le nombre de centaines, dizaines et d'unités . Ecris le nombre.

100 10 10 10 1  
100 100 10 10 10 1  
100 10 10 1  
100 10 10 1

centaines  
dizaines  
unités

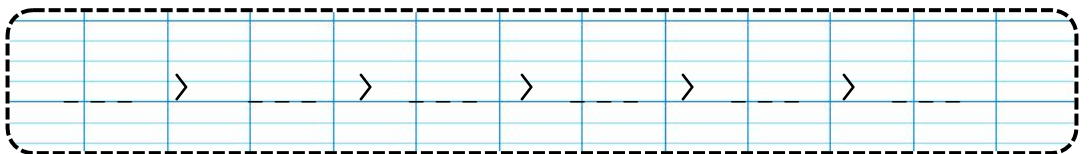



2 Dessine le bon nombre de centaines, dizaines et unités.



3 Range ces nombres dans l'ordre décroissant :











504 ; 341 ; 536 ; 476 ; 860 ; 653





# Numération

1 Entoure ce qui fait 379.



2 Ecris ces nombres en chiffres.


quatre-cent-trois


cinq-cent-vingt-quatre



sept-cent-neuf


six-cent-soixante-six


3 Ecris ces nombres en lettres.



--	--	--	--	--	--	--	--	--	--	--	--



--	--	--	--	--	--	--	--	--	--	--

4 Complète chaque série en comptant de 1 en 1.

180										
-----	--	--	--	--	--	--	--	--	--	--

196									
-----	--	--	--	--	--	--	--	--	--


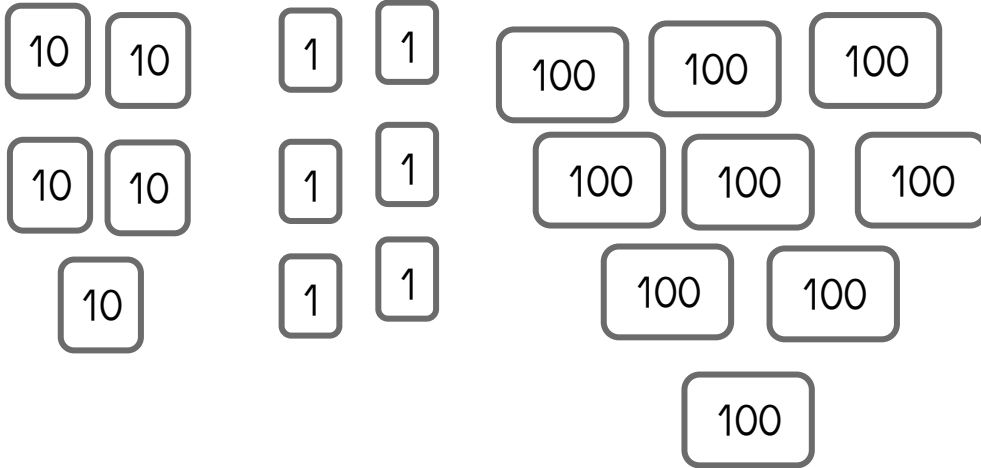
359										
-----	--	--	--	--	--	--	--	--	--	--





# Numération

Fiche 14

1 Ecris le nombre sur la carte de Girobot.



2 Dessine le bon nombre de centaines, dizaines et unités.



3 Complète les suites en comptant de 1 en 1

