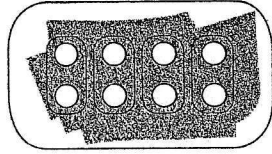
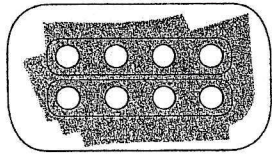
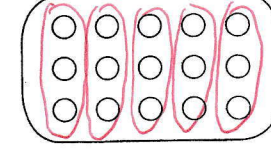



1 Groupe les billes de deux façons différentes, puis écris les deux multiplications possibles et leur résultat.



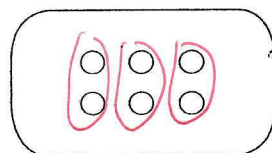
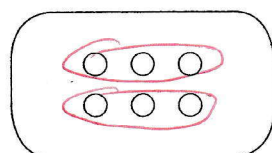
$$2 \times 4 = 8$$

$$4 \times 2 = 8$$



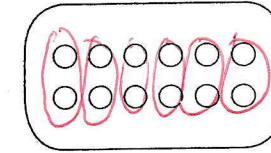
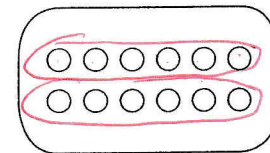
$$3 \times 5 = 15$$

$$5 \times 3 = 15$$



$$2 \times 3 = 6$$

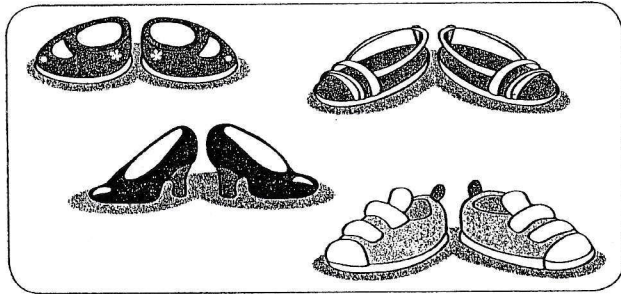
$$3 \times 2 = 6$$



$$2 \times 6 = 12$$


$$6 \times 2 = 12$$

2 Écris l'addition et la multiplication qui conviennent pour calculer le nombre de chaussures.




$$2 + 2 + 2 + 2 = 8$$

$$4 \times 2 = 8$$



$$2 + 2 + 2 + 2 + 2 + 2 = 12$$

$$6 \times 2 = 12$$



$$2 + 2 + 2 + 2 + 2 = 10$$

$$5 \times 2 = 10$$