


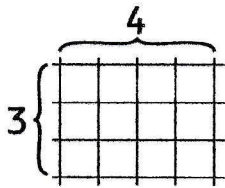

Produit de deux nombres (2)



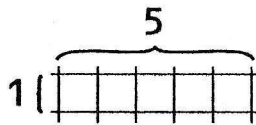
Date : \_\_\_\_\_

Nom : \_\_\_\_\_

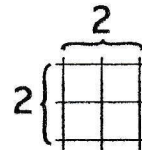
Observe.



$3 \times 4 = 4 \times 3 = 12$




$1 \times 5 = 5 \times 1 = 5$

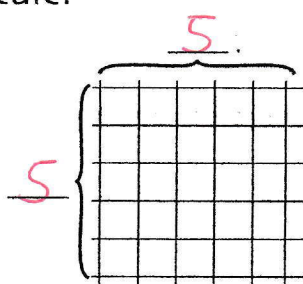


$2 \times 2 = 4$

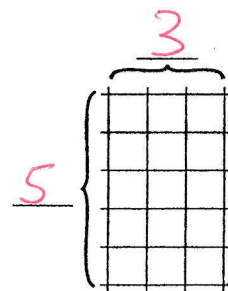
1. Écris les produits, puis calcule.



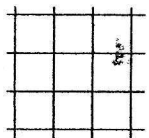
$2 \times 6 = 6 \times 2 = 12$



$5 \times 5 = 25$



$5 \times 3 = 3 \times 5 = 15$



$3 \times 3 = 9$



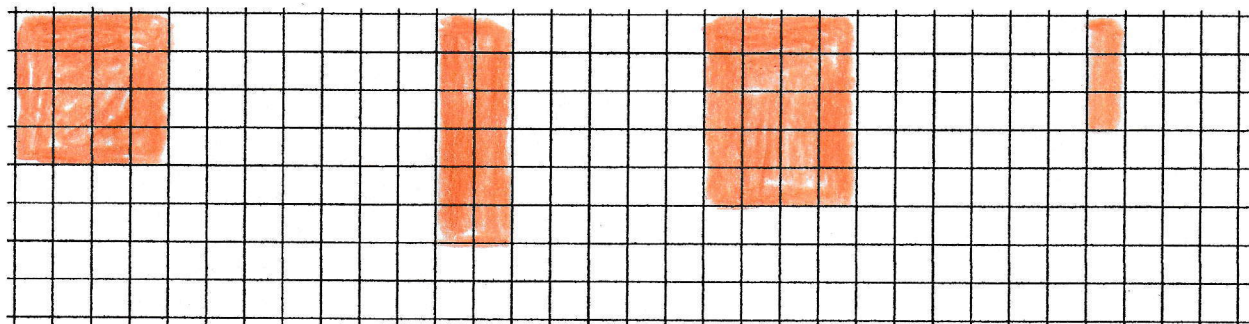
$1 \times 4 = 4 \times 1 = 4$



$2 \times 3 = 3 \times 2 = 6$

2. Colorie les cases qui représentent les produits suivants :

4 x 4 ; 6 x 2 ; 5 x 4 ; 1 x 3.



$4 \times 4 = 16$

$5 \times 4 = 5 \times 4 = 20$

$6 \times 2 = 2 \times 6 = 12$

$1 \times 3 = 3 \times 1 = 3$