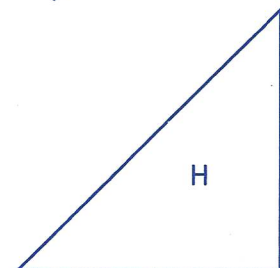
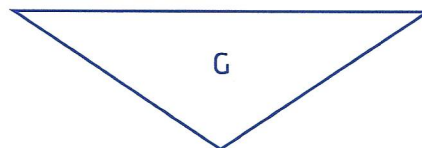

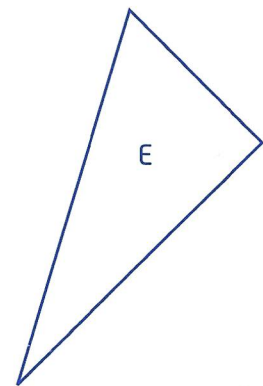
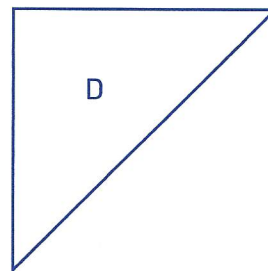
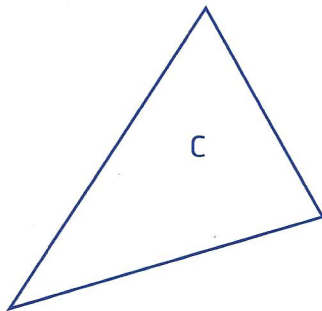
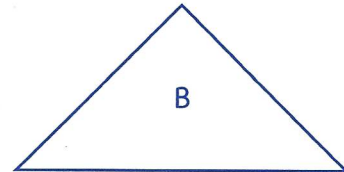
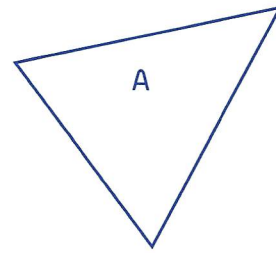


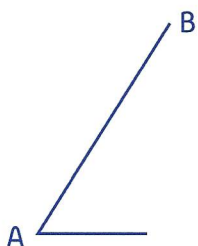
1 Range les triangles dans le tableau.

	Triangles
Triangle quelconque	
Triangle rectangle	
Triangle équilatéral	
Triangle isocèle	
Triangle rectangle isocèle	



L

2 Complète cette figure pour obtenir un triangle rectangle dont l'angle droit se trouve au sommet B.



3 Complète cette figure pour obtenir un triangle isocèle. DE est un des côtés égaux.

