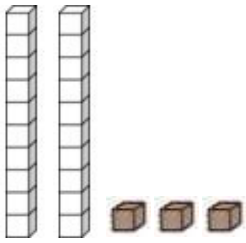


① Lis les nombres et écris en lettres .


20	vingt	27	
23		26	
28		22	
25		29	
21		24	

② Entoure les familles de 10 pour isoler les « toutes seules ».


Puis complète les tableaux .




Dizaines	Unités
...	...




Dizaines	Unités
...	...




Dizaines	Unités
...	...



Dizaines	Unités
...	...




Dizaines	Unités
...	...




Dizaines	Unités
...	...




Dizaines	Unités
...	...



Dizaines	Unités
...	...



Dizaines	Unités
...	...



Dizaines	Unités
...	...