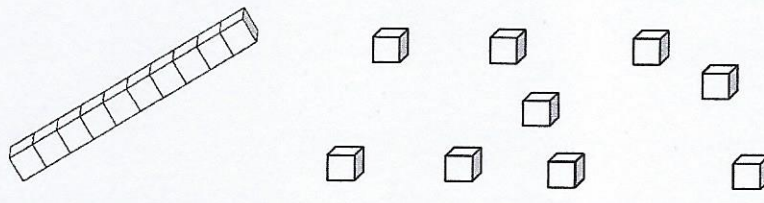


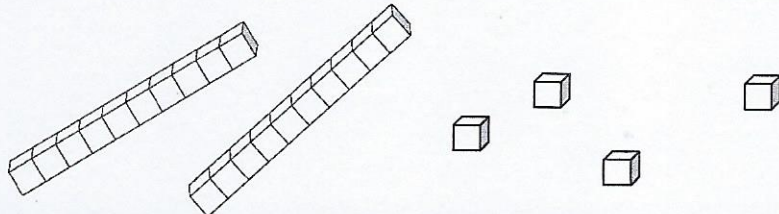


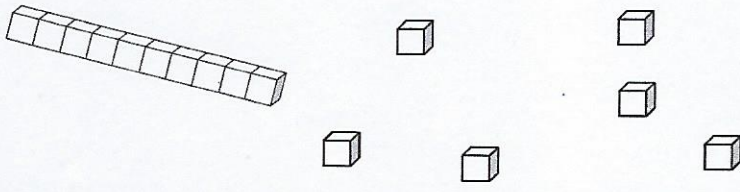


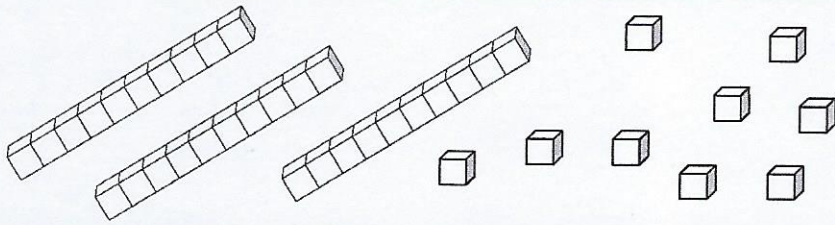




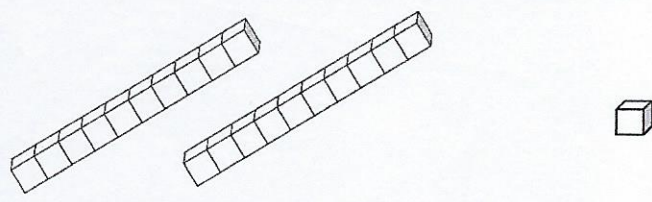


Complète le tableau pour écrire le nombre.

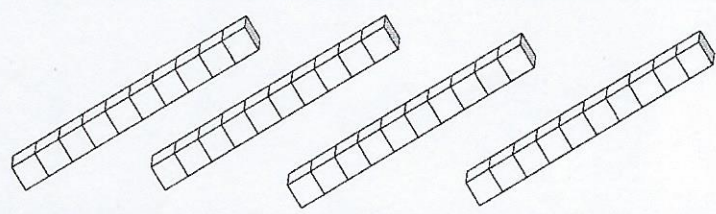


	 dizaines	 unités

	 dizaines	 unités

	 dizaines	 unités

	 dizaines	 unités

	 dizaines	 unités

	 dizaines	 unités

Prénom :

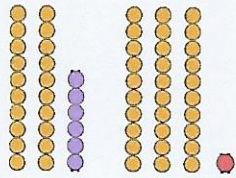
Date :

L'addition posée sans retenue 1

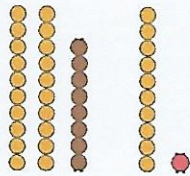
Calcul

1. Calcule ces additions :

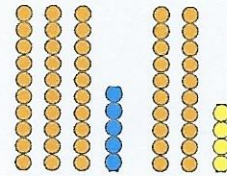
26 + 31 =



28 + 11 =



35 + 24 =



$$\begin{array}{r} 26 \\ + 31 \\ \hline \end{array}$$

$$\begin{array}{r} 28 \\ + 11 \\ \hline \end{array}$$

$$\begin{array}{r} 35 \\ + 24 \\ \hline \end{array}$$

2. Calcule ces additions posées :

	d	u
	1	5
+	3	2
<hr/>		
	.	.

	d	u
	2	7
+	3	1
<hr/>		
	.	.

	d	u
	5	3
+	2	6
<hr/>		
	.	.

	d	u
	4	0
+	5	8
<hr/>		
	.	.

	1	5
+	2	1
<hr/>		
	.	.

	6	3
+	2	1
<hr/>		
	.	.

	2	5
+	5	3
<hr/>		
	.	.

	4	3
+	5	0
<hr/>		
	.	.

	5	4
+		2
<hr/>		
	.	.

	3	3
+	2	4
<hr/>		
	.	.

	6	5
+	1	4
<hr/>		
	.	.

	2	0
+	4	4
<hr/>		
	.	.