

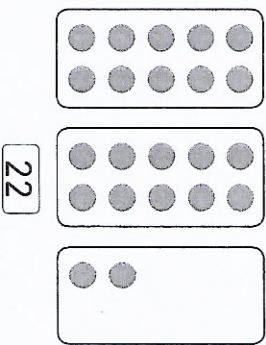
Prénom : .....

Date : .....

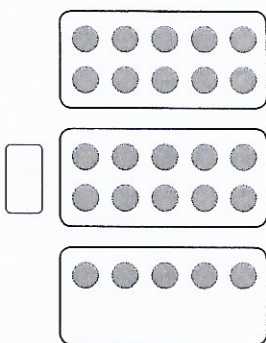
10. Les nombres jusqu'à 100

Activité 1  
Séances 61 - Comptons (2)

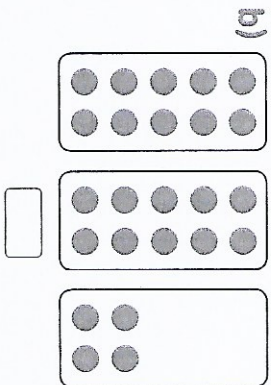
- 1 Compte les points.  
Écris les nombres en chiffres et en lettres.  
Exemple :



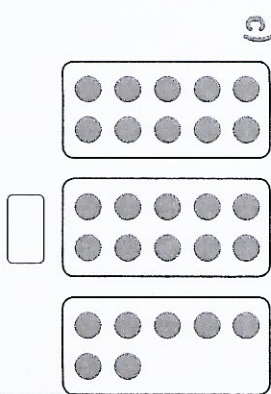
vingt-deux



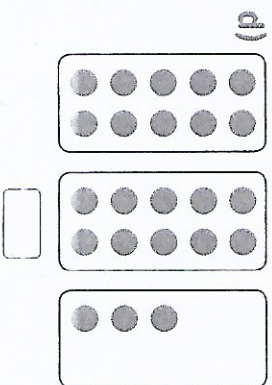
a)



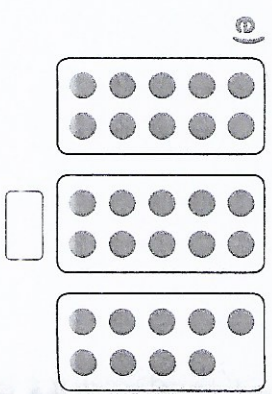
b)



c)




d)




e)


- 2 Compte les points.  
Écris les nombres en chiffres et en lettres.




a)



b)



c)



d)

e) Quel nombre est plus grand que 39 de 1 unité ?

Prénom : .....

Date : .....