

En t'aidant du chemin de la tortue, complète ces opérations

$24 + \square = 30$

$77 + \square = 80$

$62 + \square = 70$

$83 + \square = 90$

$18 + \square = 20$

$35 + \square = 40$

$39 + \square = 40$

$57 + \square = 60$

$51 + \square = 60$

$13 + \square = 20$

$46 + \square = 50$

$69 + \square = 70$

N
O
P
1



+

=

En t'aidant du chemin de la tortue, complète ces opérations

$29 + \square = 30$

$86 + \square = 90$

$52 + \square = 60$

$31 + \square = 40$

$33 + \square = 40$

$65 + \square = 70$

$38 + \square = 40$

$24 + \square = 30$

$89 + \square = 90$

$46 + \square = 50$

$53 + \square = 60$

$62 + \square = 70$

N
O
P
2



+

=

En t'aidant du chemin de la tortue, complète ces opérations

$33 + \square = 40$

$88 + \square = 90$

$61 + \square = 70$

$55 + \square = 60$

$17 + \square = 20$

$17 + \square = 20$

$37 + \square = 40$

$44 + \square = 50$

$82 + \square = 90$

$59 + \square = 60$

$76 + \square = 80$

$12 + \square = 20$

N
O
P
3



+

=

En t'aidant du chemin de la tortue, complète ces opérations

$61 + \square = 70$

$78 + \square = 80$

$43 + \square = 50$

$85 + \square = 90$

$15 + \square = 20$

$47 + \square = 50$

$36 + \square = 40$

$66 + \square = 70$


$28 + \square = 30$

$14 + \square = 20$

$73 + \square = 80$

$27 + \square = 30$

N
O
P
4



+

=

En t'aidant du chemin de la tortue, complète ces opérations

$13 + \square = 20$

$87 + \square = 90$

$34 + \square = 40$

$75 + \square = 80$

$23 + \square = 30$

$49 + \square = 50$

$72 + \square = 80$

$84 + \square = 90$

$19 + \square = 20$

$68 + \square = 70$

$32 + \square = 40$

$58 + \square = 60$

N
O
P
S



+

=

En t'aidant du chemin de la tortue, complète ces opérations

$51 + \square = 60$

$14 + \square = 20$

$63 + \square = 70$

$46 + \square = 50$

$48 + \square = 50$

$87 + \square = 90$

$69 + \square = 70$

$89 + \square = 90$

$78 + \square = 80$

$37 + \square = 40$

$86 + \square = 90$

$29 + \square = 30$

N
O
P
Q



+

=

En t'aidant du chemin de la tortue, complète ces opérations

$41 + \square = 50$

$11 + \square = 20$

$73 + \square = 80$

$66 + \square = 70$

$49 + \square = 50$

$36 + \square = 40$

$69 + \square = 70$

$87 + \square = 90$

$78 + \square = 80$

$37 + \square = 40$

$42 + \square = 50$

$29 + \square = 30$

N
O
P
7



+

=

En t'aidant du chemin de la tortue, complète ces opérations

$28 + \square = 30$

$64 + \square = 70$

$13 + \square = 20$

$39 + \square = 40$

$84 + \square = 90$

$45 + \square = 50$

$9 + \square = 10$

$79 + \square = 80$

$53 + \square = 60$

$55 + \square = 60$

$77 + \square = 80$

$46 + \square = 50$

N
O
P
Q



+

=

Prénom : _____

F1

F2

F3

F4

F5

F6

F7

F8

Entourer le niveau

N

O

1

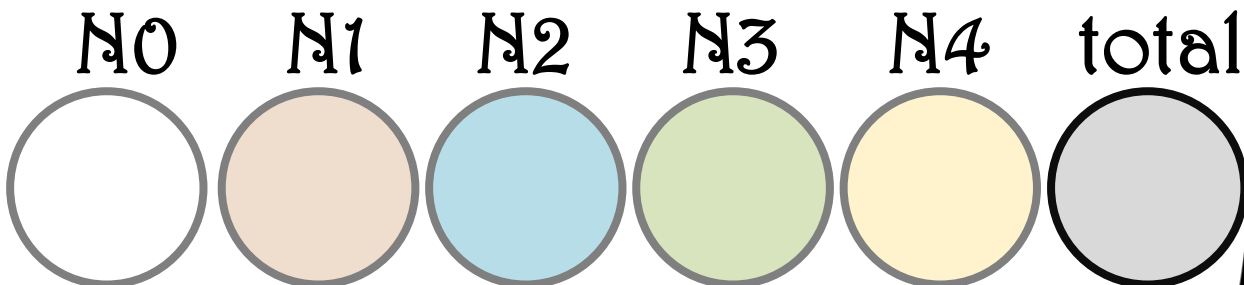
2

3

4

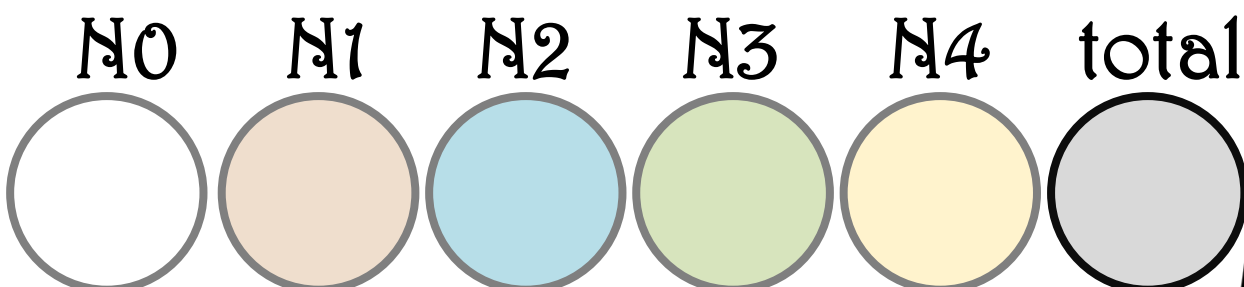
Score : _____ / 96

Diplôme des compléments



Décerné à _____

Diplôme des compléments



Décerné à _____