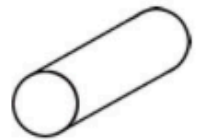
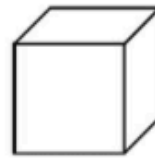
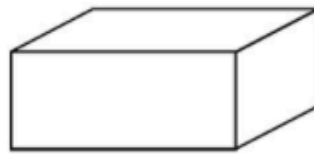
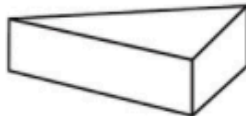
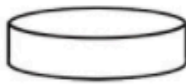





Calcul mental

- Un nouveau groupe de dix ou non ? (somme ≤ 69)
- Groupes de 2, 5 et 10



Relie ce qui a la même forme.



a

b

c

d

e

f

Classe les solides comme dans l'exemple.

ceux qui roulent

ceux qui glissent

ceux qui glissent
et roulent

a

Calcule en choisissant l'une des méthodes de Picbille.

Si tu n'es pas sûr(e), dessine au brouillon.

$$24 + 26 = \dots$$

$$= \dots$$

$$29 + 19 = \dots$$

$$= \dots$$

$$48 + 14 = \dots$$

$$= \dots$$

$$37 + 32 = \dots$$

$$= \dots$$