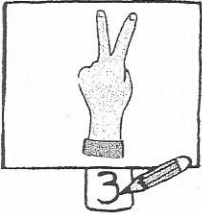





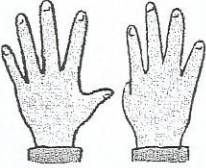
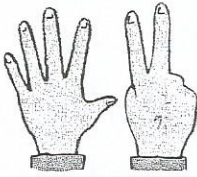
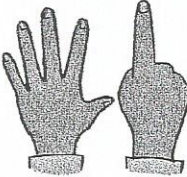
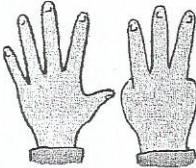
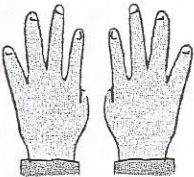

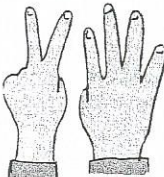

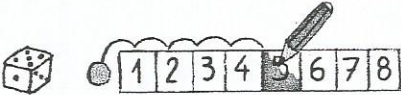
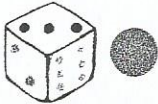



Compléments à 5, à 10

lundi	mardi	mercredi	jeudi	vendredi	samedi	dimanche
-------	-------	----------	-------	----------	--------	----------

1		Écris le nombre de doigts que tu ne vois pas.				
2						
3						
4						
6						
7						
	<input type="text"/>	<input type="text"/>	<input type="text"/>	<input type="text"/>	<input type="text"/>	
10						
11						
12						
13						
14						
15	<input type="text"/>	<input type="text"/>	<input type="text"/>	<input type="text"/>		
16						
17						
18						
19						
20						
21	<input type="text"/>	<input type="text"/>	<input type="text"/>	<input type="text"/>		
22						
23						

24		Colorie en rouge les cases d'arrivée.									
25											
26		1	2	3	4	5	6	7	8	9	10
27											
28		1	2	3	4	5	6	7	8	9	10
29											
30											
31											

• Trouver les compléments à 5, à 10.
Résoudre un problème de déplacement sur une piste numérique.