



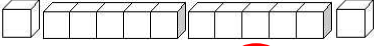
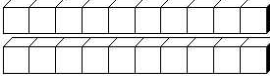
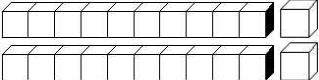
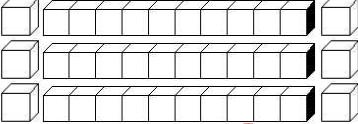
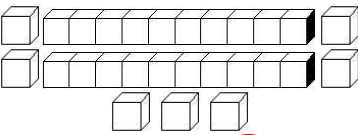
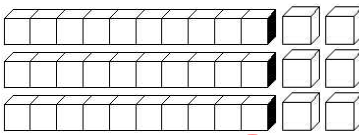
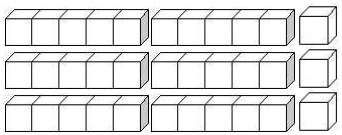
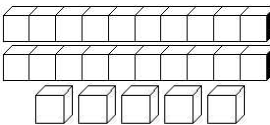
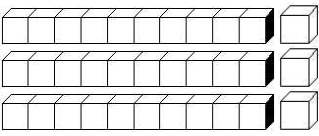
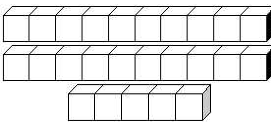
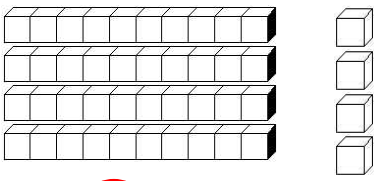

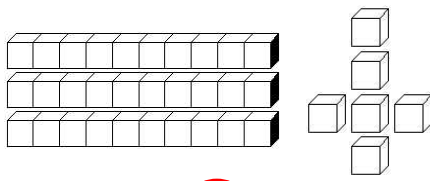
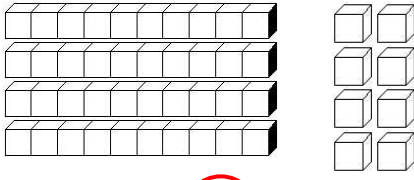
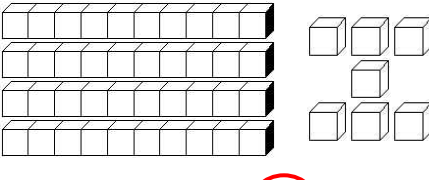
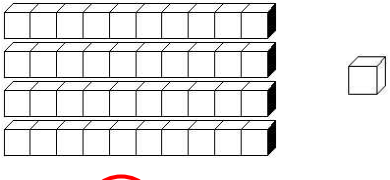
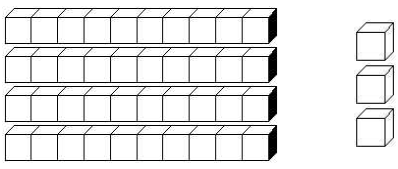
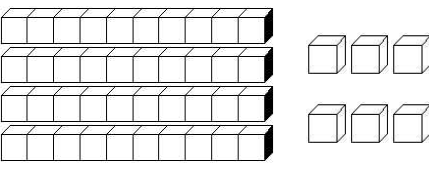
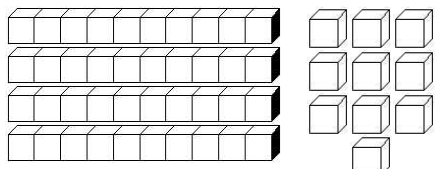
Prénom :

Date :

COMPTER

Je compte jusqu'à... 50 (03)

• Combien y a-t-il de cubes ? (Entoure la bonne réponse)

 10 13 15	 6 5 7	 10 11 12
 20 21 22	 22 23 24	 33 26 36
 25 26 27	 32 34 36	 33 55 44
 23 24 25	 33 34 35	 23 24 25
 44 33 50	 35 53 43	 34 36 37
 38 48 18	 43 45 47	 41 16 14
 34 43 47	 46 48 50	 40 50 60

• Range du plus GRAND au plus PETIT :

35	25	45	33	30	50	40	47	29	39
▶ 50	47	45	40	39	35	33	30	29	25