

Prénom : .....


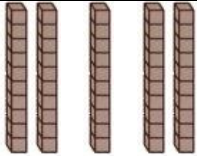
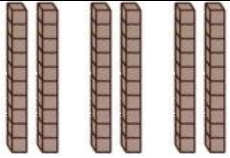
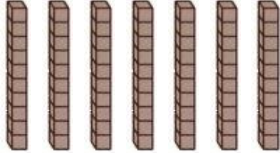

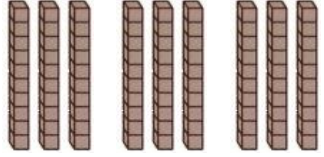
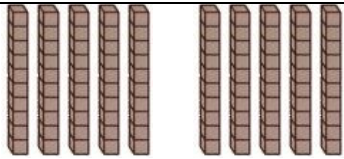
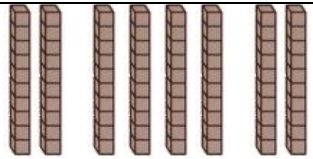
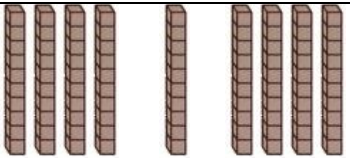
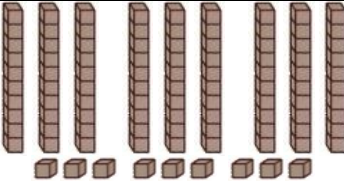
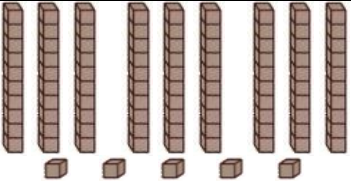
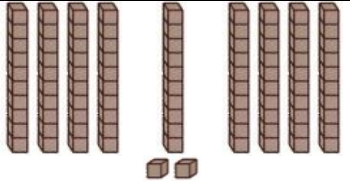
Date : .....

<b>COMPTER</b>	<b>Je compte jusqu'à... 100</b> <small>(02)</small>
----------------	---

- Complète la suite numérique de 0 à 99 :

0	1	2	3	4	5	6	7	8	9
10	.....	.....	13	.....	.....	16	.....	.....	19
20	.....	.....	23	.....	.....	26	.....	.....	29
30	.....	.....	33	.....	.....	36	.....	.....	39
40	.....	.....	43	.....	.....	46	.....	.....	49
50	.....	.....	53	.....	.....	56	.....	.....	59
60	.....	.....	63	.....	.....	66	.....	.....	69
70	.....	.....	73	.....	.....	76	.....	.....	79
80	.....	.....	83	.....	.....	86	.....	.....	89
90	.....	.....	93	.....	.....	96	.....	.....	99

- Combien y a-t-il de cubes dans les cases suivantes ?

 <b>20 30 40</b>	 <b>40 50 60</b>	 <b>40 60 50</b>
 <b>60 70 80</b>	 <b>80 70 60</b>	 <b>70 80 90</b>
 <b>90 100 80</b>	 <b>80 90 100</b>	 <b>80 90 70</b>
 <b>90 88 99</b>	 <b>59 95 100</b>	 <b>92 29 100</b>