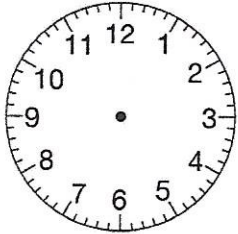


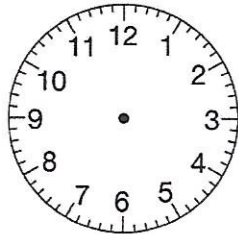
Prénom : Date :

Lire les heures et les demi-heures

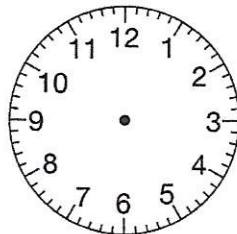
1. Complète les horloges en dessinant les aiguilles.



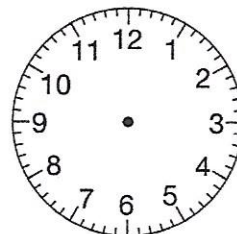
a. Il est 5 h.



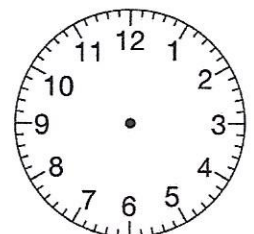
b. Il est 2 h.



c. Il est 10 h.

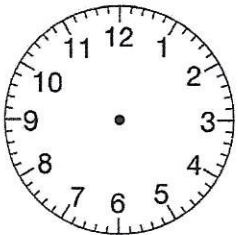


d. Il est 6 h.

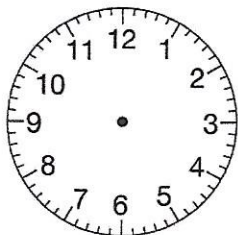


e. Il est 12 h.

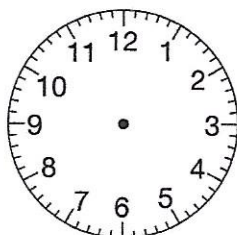
2. Complète les horloges en dessinant les aiguilles.



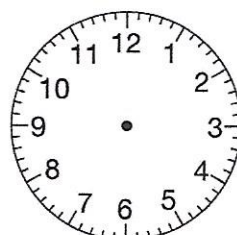
a. Il est 4 h 30.



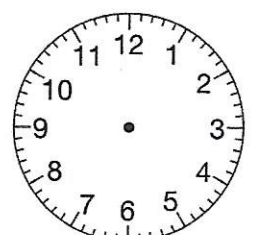
b. Il est 3 h 30.



c. Il est 11 h 30.




d. Il est 6 h 30.




e. Il est 9 h 30.


3. Quelle heure est-il ?




.....




.....



.....



.....



.....