


Entoure les quilles pour obtenir 10 points.



Calcule.

$5 + 5 = \dots$

$4 + 4 + 1 = \dots$

$3 + 6 = \dots$

$3 + 3 + 2 = \dots$

$7 + 2 = \dots$

$4 + 4 + 2 = \dots$

$6 + 4 = \dots$

$6 + 2 + 2 = \dots$

$8 + 2 = \dots$


$3 + 5 + 1 = \dots$

$5 + 3 = \dots$

$1 + 1 + 8 = \dots$

$7 + 3 = \dots$

Entoure les quilles pour obtenir 10 points.



Calcule.

$5 + 5 = \dots$

$4 + 4 + 1 = \dots$

$3 + 6 = \dots$

$3 + 3 + 2 = \dots$

$7 + 2 = \dots$

$4 + 4 + 2 = \dots$

$6 + 4 = \dots$

$6 + 2 + 2 = \dots$

$8 + 2 = \dots$

$3 + 5 + 1 = \dots$

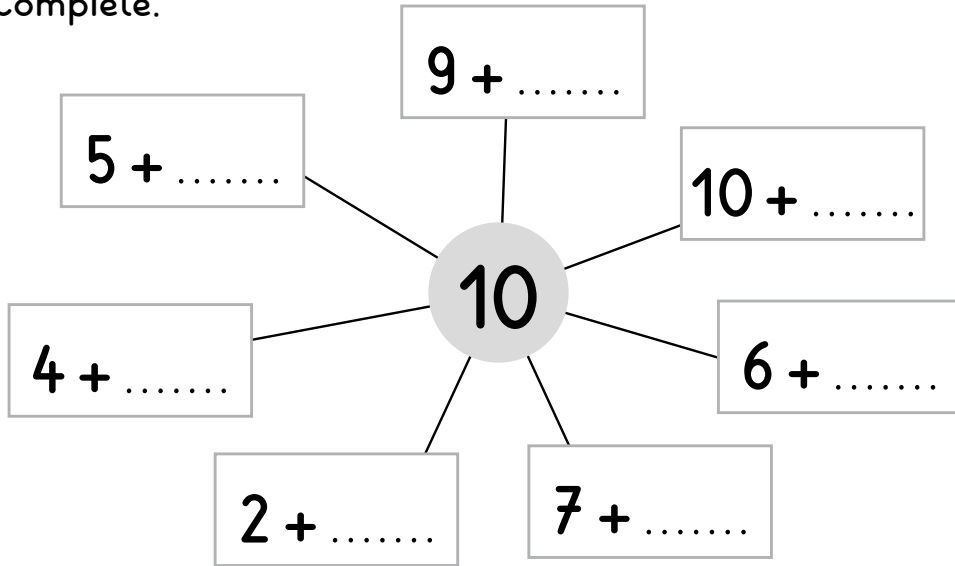
$5 + 3 = \dots$

$1 + 1 + 8 = \dots$

$7 + 3 = \dots$



Complète.



Calcule.

$10 - 1 = \dots$

$10 - 8 = \dots$

$10 - 3 = \dots$

$10 - 9 = \dots$

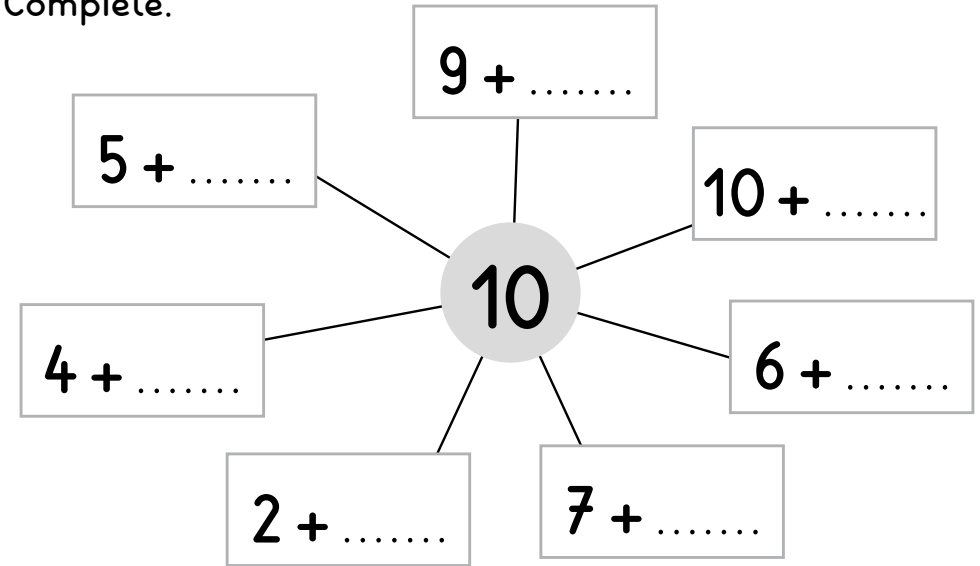
$10 - 4 = \dots$

$10 - 10 = \dots$

$10 - 5 = \dots$

$10 - 7 = \dots$

Complète.



Calcule.

$10 - 1 = \dots$

$10 - 8 = \dots$

$10 - 3 = \dots$

$10 - 9 = \dots$

$10 - 4 = \dots$

$10 - 10 = \dots$

$10 - 5 = \dots$

$10 - 7 = \dots$

