


Objectif : Je sais lire les heures et les minutes.

1. Écris les heures de ces horloges de deux manières différentes comme dans l'exemple.



5 h 40 min
6 heures moins vingt



..... h min



..... h min



..... h min



..... h min



..... h min




..... h min




..... h min


2. Place les aiguilles selon les heures indiquées.




13 h 40 min




8 heures moins vingt-cinq




2 heures moins le quart




15 h 55 min




7 heures moins dix



22 h 35 min



Midi moins le quart



16 heures moins vingt