

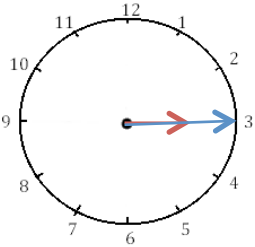


Mesures

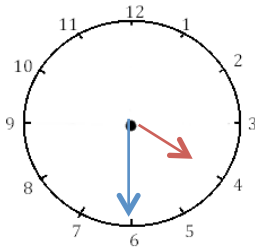
Fiche 6

Les heures

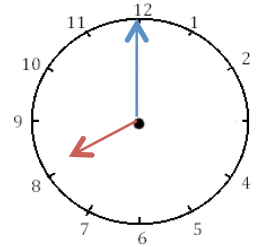
1 J'écris les heures indiquées sur ces horloges. Nous sommes le matin.



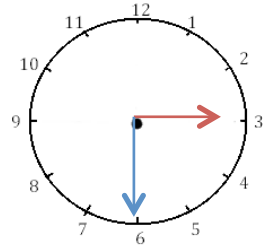
Il est _____



Il est _____

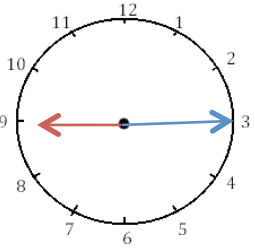


Il est _____

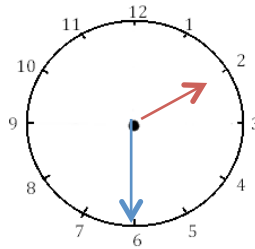


Il est _____

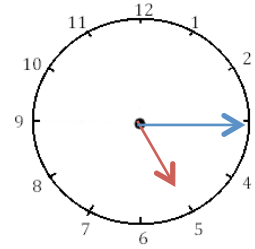
2 J'écris les heures indiquées sur ces horloges. Nous sommes l'après-midi.



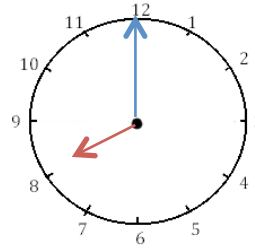
Il est _____



Il est _____



Il est _____

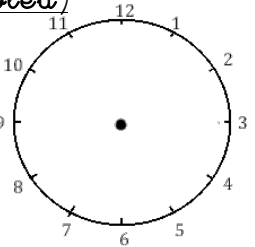


Il est _____

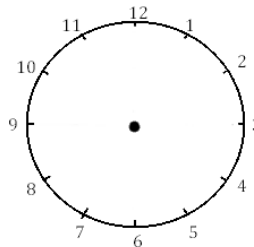


3 Je place les aiguilles selon les heures indiquées. (heures en rouge, minutes en

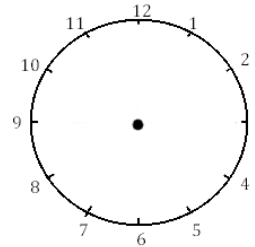
bleu)



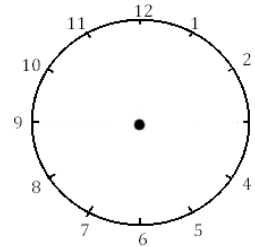
Il est 2 h 00 min.



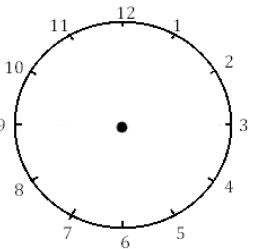
Il est 12 h 30 min.



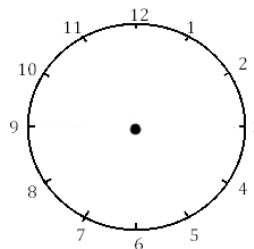
Il est 5 h 15 min.



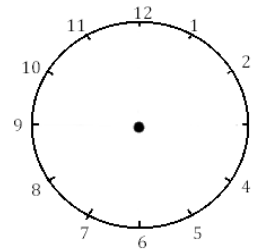
Il est 6 h et demie.



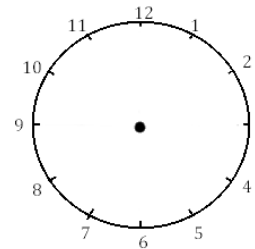
Il est 3 h et quart.



Il est 11 h 00 min.



Il est 1 h 30 min.



Il est 21 h 15 min.

