



1 Écris dans le nuage le nombre d'étoiles cachées :

2 Colorie les pions pour obtenir 10 points dans chaque valise.



	2	1	2	3	1	4	1	5	1	1	3	3
--	---	---	---	---	---	---	---	---	---	---	---	---

3 Colorie les pions pour obtenir 12 points dans chaque valise.



	4	1	2	3	6	4	3	5	1	1	2	3
--	---	---	---	---	---	---	---	---	---	---	---	---

4 Colorie en jaune si le résultat est 6, en vert si le résultat est 9 :

		5+1		3+3		7-1		4+2
	10-1		5+4		6+3		8+1	
		4+5		2+4		8+1		3+2+1
	1+5		2+2		4+4		10-1	
		2+2+2		7+2		3+3+3		9+0



Décomposition du nombre.

Calcul

Fiche n°18A

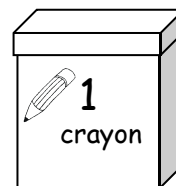
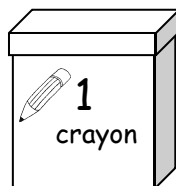
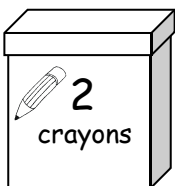


lundi mardi mercredi jeudi vendredi samedi dimanche



/ /


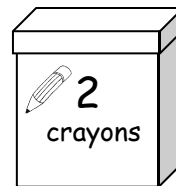
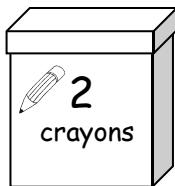
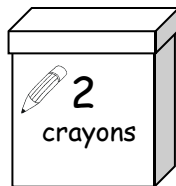
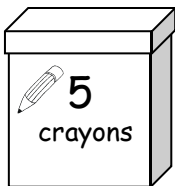
1 Colorie les boîtes dont tu as besoin pour avoir 8 crayons.

8





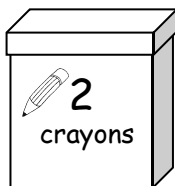
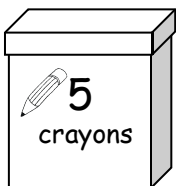
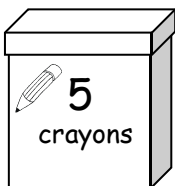
2 Colorie les boîtes dont tu as besoin pour avoir 6 crayons.

6



3 Colorie les boîtes dont tu as besoin pour avoir 10 crayons.

10




3 Colorie en rouge si le résultat est 4, en bleu si le résultat est 8 :



	5-1		1+3		3+3+2		3+1
10-1		0+4		5+3		4+3+1	
	4+4		5+5		8-4		9-1
3+7		2+6		2+2		6+2	

4 Calcule en te déplaçant sur la bande numérique :



1	2	3	4	5	6	7	8	9	10
---	---	---	---	---	---	---	---	---	----

3 + 1 =

3 + 5 =

5 + = 6

4 + = 8

3 + 3 =

7 + 2 =

5 + = 9

2 + = 4