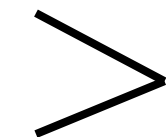
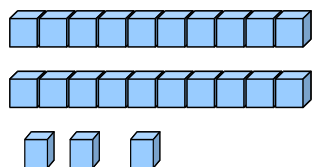


Les nombres dizaines et unités comparer

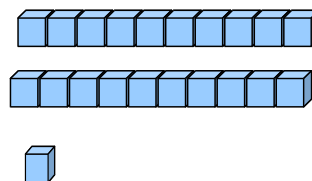
1) Compare les nombres suivants.



plus grand



.....



plus petit

.....

.....

.....

.....

.....

.....

.....

.....

.....

.....

.....

.....

.....

.....

.....

.....

.....

.....

.....