



lundi mardi mercredi jeudi vendredi samedi dimanche



/ /

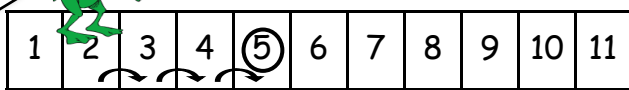
A Utiliser la bande numérique. Écrire l'opération correspondante. Calculer.

1 Complète et indique sur quelle case on va planter le drapeau :

3 + 2 = 5

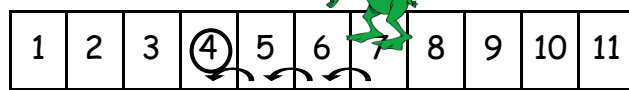


+3



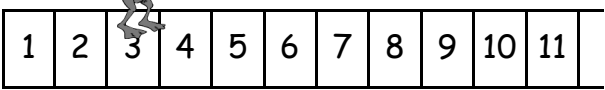
2 + 3 = 5

-3



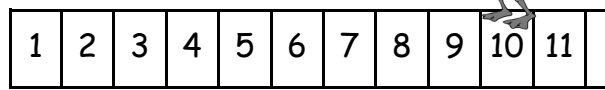
7 - 3 = 4

+5



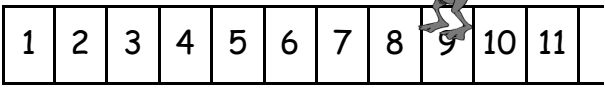
3 + 5 = ____

-3



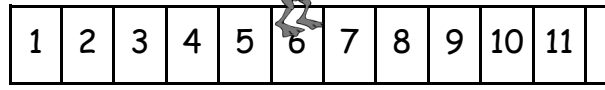
10 - 3 = ____

-2



9 - ____ = ____

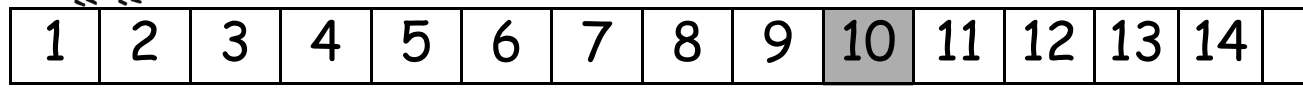
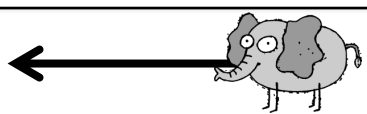

+4




6 + ____ = ____

2 Calcule en te déplaçant sur la bande numérique, aide-toi des animaux !!! :

3 + 2 = 5



- 7 + 3 = ____
- 4 + 4 = ____
- 3 + 2 = ____
- 1 + 5 = ____
- 2 + 5 = ____



- 6 - 3 = ____
- 8 - 2 = ____
- 4 - 3 = ____
- 6 - 5 = ____
- 8 - 1 = ____

