

Exercices

Additionner en passant par 10

1

Complète pour faire 10.

10

- 9+..
- 8+..
- 7+..
- 6+..
- 5+ ..
- 4+ ..
- 3+ ..
- 1+ ..

2

Observe et colorie l'opération la plus simple.



$7 + 2 + 3 = 12$

$7 + 3 + 2 = 12$

$6 + 4 + 5 = 15$

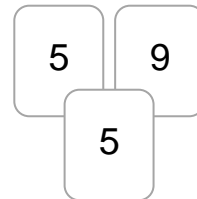
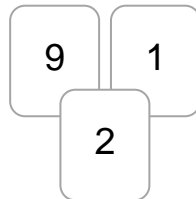
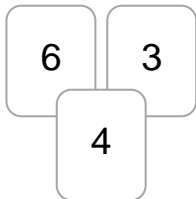
$6 + 5 + 4 = 15$

$2 + 3 + 8 = 13$

$8 + 2 + 3 = 13$

3

Ecris l'addition la plus simple.



... + ... + ... = ...

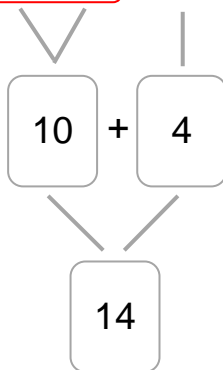
... + ... + ... = ...

... + ... + ... = ...

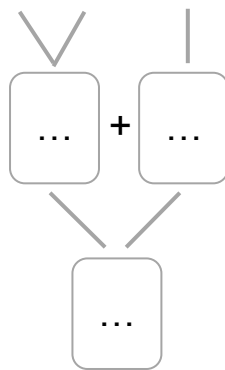
4

Calcule en passant par 10.

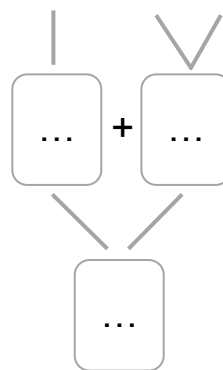
$7 + 3 + 4$



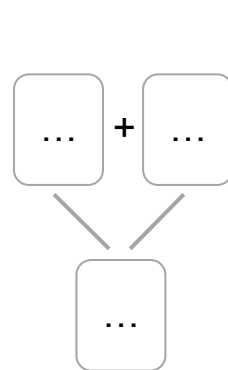
$8 + 2 + 6$



$5 + 6 + 4$



$8 + 1 + 9$



Nom : .....

Date : .....

- Passer par 10 pour simplifier les calculs additifs.

Corrigé

## Additionner en passant par 10

1

Complète pour faire 10.

10

$9+1$

$8+2$

$7+3$

$6+4$

$5+5$

$4+6$

$3+7$

$1+9$

2

Observe et colorie l'opération la plus simple.



$7 + 2 + 3 = 12$

$7 + 3 + 2 = 12$

$6 + 4 + 5 = 15$

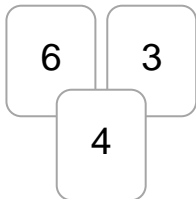
$6 + 5 + 4 = 15$

$2 + 3 + 8 = 13$

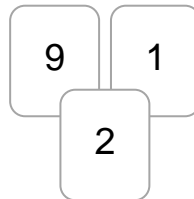
$8 + 2 + 3 = 13$

3

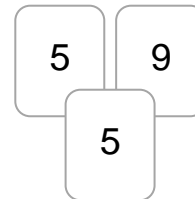
Ecris l'addition la plus simple.



$6 + 4 + 3 = 13$



$9 + 1 + 2 = 12$

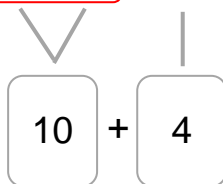


$5 + 5 + 9 = 19$

4

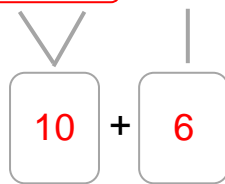
Calcule en passant par 10.

$7 + 3 + 4$



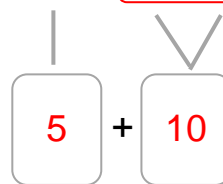
14

$8 + 2 + 6$



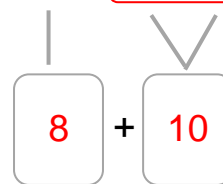
16

$5 + 6 + 4$



15

$8 + 1 + 9$



18