



1 Relie chaque domino à la bonne opération.



○

○

$1 + 1$



○

○


$2 + 2$



○

○


$3 + 3$



○

○


$4 + 4$




○

○

$5 + 5$



2 Calcule ces doubles.



$4 + 4 = \underline{\quad}$

$7 + 7 = \underline{\quad}$

$5 + 5 = \underline{\quad}$

$6 + 6 = \underline{\quad}$

$8 + 8 = \underline{\quad}$

$9 + 9 = \underline{\quad}$

3 Complète les phrases.

Le double de 2, c'est : _____

Le double de 3, c'est : _____