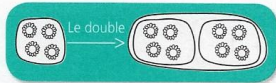
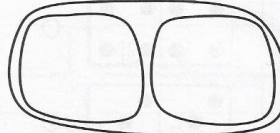



1 Dessine à chaque fois le double de fleurs.





Le double



Le double



Le double



2 Calcule ces doubles.



$1 + 1 = \underline{\quad}$

$8 + 8 = \underline{\quad}$

$7 + 7 = \underline{\quad}$

$6 + 6 = \underline{\quad}$

$10 + 10 = \underline{\quad}$

$9 + 9 = \underline{\quad}$

3 Complète.

Le double de 3, c'est : \_\_\_\_\_

Le double de 5, c'est : \_\_\_\_\_