


1 Ecris le nombre de hérissons de plusieurs façons :

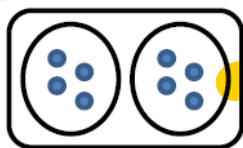


$$5 + 5 + 5 = 15$$

$$3 + 3 + 3 + 3 + 3 = 15$$

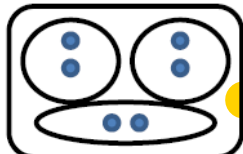
On peut aussi écrire : 5×3 ou 3×5

2 Relie chaque dessin à la multiplication qui convient :



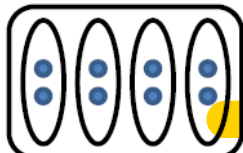
4×2

2×3



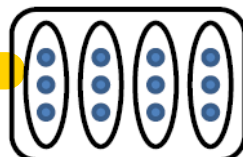
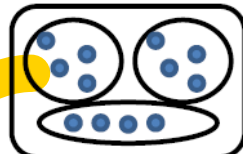
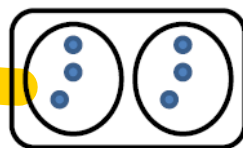
3×2

3×4



2×4

4×3



Problème :

Un poulet rôti a 2 cuisses.
Maman a acheté 3 poulets.
Combien y a-t-il de cuisses en tout?

dessin ou calcul :

$2 \times 3 = 6$

phrase réponse :

Il y a 6 cuisses en tout.