

## 2

## Opérations

L'addition des entiers

Date : \_\_\_\_\_

1 Effectue ces additions.


	3	2	3	1
+	1	2	1	4

	4	1	5	2
+		4	2	7

2 Pose ces additions et calcule.

$$734 + 235 =$$


$$1637 + 3201 =$$

3 Calcule à l'aide de ta calculatrice.


$$74 + 36 + 29 = \underline{\hspace{2cm}}$$

$$36 + 52 + 63 = \underline{\hspace{2cm}}$$

$$30 + 96 + 21 = \underline{\hspace{2cm}}$$

$$93 + 230 + 321 = \underline{\hspace{2cm}}$$

$$393 + 321 + 65 = \underline{\hspace{2cm}}$$



1 Calcule en ligne.

$45 + 3 = \underline{\hspace{2cm}}$

$77 + 4 = \underline{\hspace{2cm}}$

$63 + 6 = \underline{\hspace{2cm}}$

$68 + 5 = \underline{\hspace{2cm}}$

$34 + 3 = \underline{\hspace{2cm}}$

$76 + 8 = \underline{\hspace{2cm}}$

$42 + 6 = \underline{\hspace{2cm}}$


$43 + 7 = \underline{\hspace{2cm}}$

$15 + 7 = \underline{\hspace{2cm}}$

$87 + 5 = \underline{\hspace{2cm}}$



2 Calcule en ligne.



$30 + 40 = \underline{\hspace{2cm}}$

$110 + 30 = \underline{\hspace{2cm}}$

$60 + 50 = \underline{\hspace{2cm}}$

$300 + 350 = \underline{\hspace{2cm}}$

$40 + 90 = \underline{\hspace{2cm}}$

$200 + 900 = \underline{\hspace{2cm}}$

$20 + 70 = \underline{\hspace{2cm}}$

$360 + 40 = \underline{\hspace{2cm}}$

$80 + 30 = \underline{\hspace{2cm}}$

$190 + 20 = \underline{\hspace{2cm}}$

3 Calcule à l'aide de ta calculatrice.


$632 + 389 = \underline{\hspace{2cm}}$

$708 + 563 + 19 = \underline{\hspace{2cm}}$

$267 + 624 + 83 = \underline{\hspace{2cm}}$

$95 + 538 + 27 = \underline{\hspace{2cm}}$

$321 + 138 + 37 = \underline{\hspace{2cm}}$



1 Complète ces carrés magiques.

	7		→ 20
2			→ 20
10		0	→ 20
↓	↓	↓	
20	20	20	

	12		→ 28
12			→ 28
14		6	→ 28
↓	↓	↓	
28	28	28	



	10		→ 40
2			→ 40
24		1	→ 40
↓	↓	↓	
40	40	40	

	13		→ 36
5			→ 36
16		13	→ 36
↓	↓	↓	
36	36	36	

	22		→ 48
20			→ 48
17		15	→ 48
↓	↓	↓	
48	48	48	

	11		→ 44
15			→ 44
10		14	→ 44
↓	↓	↓	
44	44	44	

1 Effectue ces additions.


	1	3	5	2
		6	2	3
+			2	4

	3	1	8	4
		4	0	4
+		6	3	4

2 Pose ces additions et calcule.

$$732 + 328 + 45 =$$


$$3\ 056 + 607 + 62 =$$

$$2\ 653 + 630 + 154 =$$


1 Complète les opérations.

	4	.	5	3
+	1	2	.	1
	.	8	7	.

	2	.	2	.
+	.	7	.	5
	7	5	8	0

2 Complète le tableau.

$25 + 12 = 37$   
Chaque case contient la somme des deux cases du dessus.

25	12	14	31	23
37				



3 Trouve à l'aide de ta calculatrice le bon résultat.



$6\,476 + 2\,347 \rightarrow$

$8\,403 + 45\,789 \rightarrow$

$9\,970 + 3\,458 \rightarrow$

$24\,809 + 9\,430 \rightarrow$

$734\,750 + 479 \rightarrow$

_____
_____
_____
_____
_____