



1 Combien y-a-t-il de cœurs ?



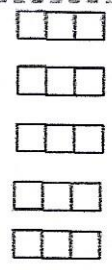
... + ... + ... = ...  
... X ... = ...

2 Combien y-a-t-il de ronds ?



... + ... + ... + ... + ... = ...  
... X ... = ...

3 Combien y-a-t-il de cubes ?



... + ... + ... + ... + ... = ...  
... X ... = ...

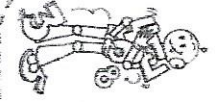
4 Dessine le nombre de paquets de cubes correspondant à l'opération.

5 + 5 + 5 = ...

... X ... = ...


Ton dessin :

5 Ecris ces additions sous forme de multiplications et calcule.



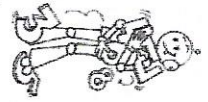
5 + 5 + 5 + 5 = ... X ... = ...  
2 + 2 + 2 + 2 + 2 = ... X ... = ...  
10 + 10 + 10 + 10 + 10 + 10 = ... X ... = ...

6 Ecris ces additions sous forme de multiplications et calcule.



5 + 5 + 5 + 5 + 5 = ... X ... = ...  
3 + 3 + 3 + 3 = ... X ... = ...  
10 + 10 + 10 = ... X ... = ...

7 Ecris ces multiplications sous forme de additions et calcule.



2 X 10 = ... + ... + ... = ...  
3 X 20 = ... + ... + ... = ...  
4 X 100 = ... + ... + ... + ... = ...

8 Ecris ces multiplications sous forme de additions et calcule.

8 X 5 = ... + ... + ... = ...

2 X 100 = ... + ... + ... = ...

3 X 30 = ... + ... + ... = ...